

















Підстав відповідні значення та обчисли:

	×		=
	×		=
	×		=
	×		=
	×		=
	×		=
	×		=
	×		=

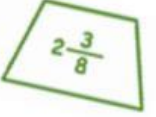
 $5\frac{2}{5}$

 $5\frac{6}{7}$

 $4\frac{3}{7}$

 $3\frac{8}{12}$

 $7\frac{4}{9}$

 $2\frac{3}{8}$

 $5\frac{2}{3}$

 $5\frac{3}{7}$