

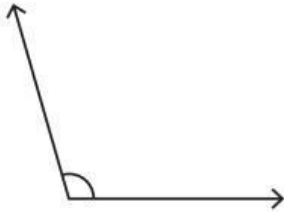
Name: \_\_\_\_\_

## Identifying the Types of Angles

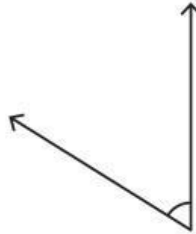
T2S1

A) Identify each angle as acute, right, obtuse, straight, or reflex.

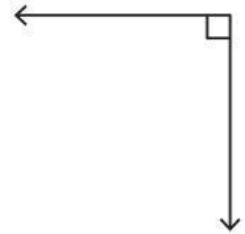
1)



2)



3)



B) Identify the type of each angle.

1)  $293^\circ$

\_\_\_\_\_

2)  $115^\circ$

\_\_\_\_\_

3)  $180^\circ$

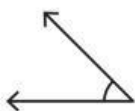
\_\_\_\_\_

4)  $79^\circ$

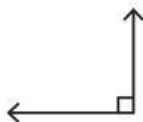
\_\_\_\_\_

C) 1) Which of the following is an acute angle?

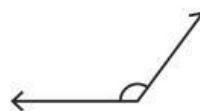
a)



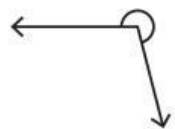
b)



c)



d)



2) Which of the following is a reflex angle?

a)



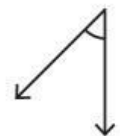
b)



c)



d)

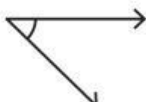


3) Which of the following is a straight angle?

a)



b)



c)



d)

