


1. Uzupełnij działania według podanego schematu.

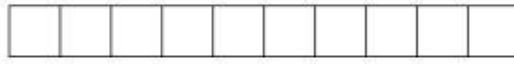
$2+3=5$



$6+1=$




$4+3=$




$5+4=$




$1+7=$




$2+8=$



$3+5=$



$8+0=$



2. Uzupełnij grafy.

+4 +2

3 +

$3+4+2=$ $=3+$

+3 +5

2 +