



# GREATER, LESS AND EQUAL SHEET 2

Circle the correct choice.

|    |  |  |  |
|----|--|--|--|
| 1) |  | <p>is more than &gt;</p> <p>is equal to =</p> <p>is less than &lt;</p> |  |
| 2) |  | <p>is more than &gt;</p> <p>is equal to =</p> <p>is less than &lt;</p> |  |
| 3) |  | <p>is more than &gt;</p> <p>is equal to =</p> <p>is less than &lt;</p> |  |
| 4) |  | <p>is more than &gt;</p> <p>is equal to =</p> <p>is less than &lt;</p> |  |
| 5) |  | <p>is more than &gt;</p> <p>is equal to =</p> <p>is less than &lt;</p> |  |
| 6) |  | <p>is more than &gt;</p> <p>is equal to =</p> <p>is less than &lt;</p> |  |



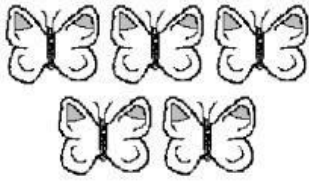
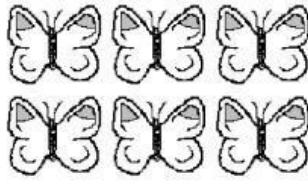
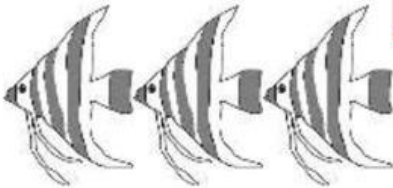
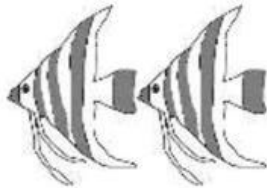








Name

Date



## GREATER, LESS AND EQUAL SHEET 2 ANSWERS

Circle the correct choice.

|    |   |  |   |
|----|---|--|---|
| 1) |    | <p>is more than &gt;</p> <p>is equal to =</p> <p>is less than &lt;</p> |    |
| 2) |    | <p>is more than &gt;</p> <p>is equal to =</p> <p>is less than &lt;</p> |    |
| 3) |    | <p>is more than &gt;</p> <p>is equal to =</p> <p>is less than &lt;</p> |    |
| 4) |  | <p>is more than &gt;</p> <p>is equal to =</p> <p>is less than &lt;</p> |  |
| 5) |  | <p>is more than &gt;</p> <p>is equal to =</p> <p>is less than &lt;</p> |  |
| 6) |  | <p>is more than &gt;</p> <p>is equal to =</p> <p>is less than &lt;</p> |  |