






Name: _____ Date: _____

Mathematics

Measurement-Weight

Use the food and their weight to answer the questions below.

carrot	pumpkin	yam	cabbage	potato
				
10 kg	25 kg	12 kg	8 kg	6 kg

1. The heaviest item is the _____.
2. The lightest item is the _____.
3. What is the weight of the potato, carrot and cabbage altogether?
_____.
4. If the carrot was 7 kg heavier what would be its weight?
_____.
5. If Tim bought the yam and pumpkin what would be the total weight of the items? _____.
6. The yam is heavier than the _____, _____ and _____ but lighter than the _____.
7. If Kim bought 2 cabbages what would be the total weight of them?
_____.
8. If the potato was 6 kg heavier it would be the same weight as the _____.