

Nama: _____

Tarikh: _____

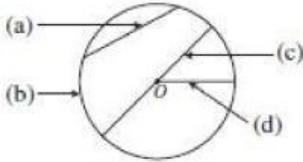
Chapter 5: Circles

Bab 5: Bulatan

5.1 Sifat Bulatan

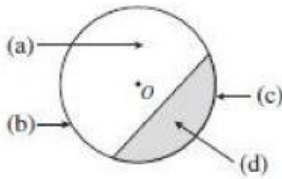
1. *O* ialah pusat bulatan. Namakan bahagian-bahagian bulatan itu.
O is the centre of the circle. Name the parts of the circles.

1.



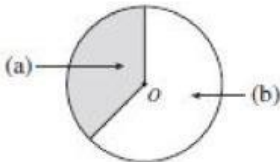
- (a).....
- (b).....
- (c).....
- (d).....

2.



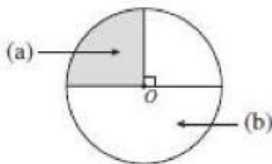
- (a).....
- (b).....
- (c).....
- (d).....

3.



- (a).....
- (b).....

4.



- (a).....
- (b).....

- Diameter
- Diameter*
- Jejari
- Radius*
- Lengkuk major
- Major arc*
- Lengkuk minor
- Minor arc*
- Lilitan
- Circumference*
- Perentas
- Chord*
- Sektor major
- Major sector*
- Sektor minor
- Minor sector*
- Semibulatan
- Semicircle*
- Sukuan bulatan
- Quadrant*
- Tembereng major
- Major segment*
- Tembereng minor
- Minor segment*