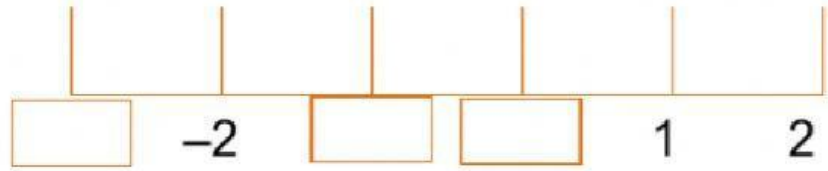
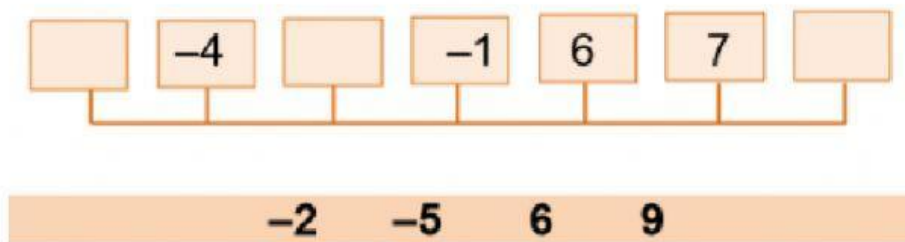


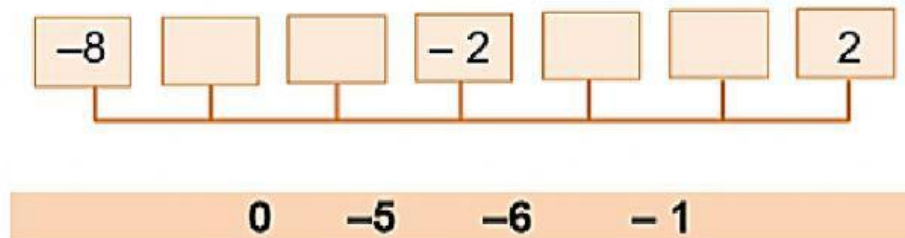
Q1- Complete the number line.



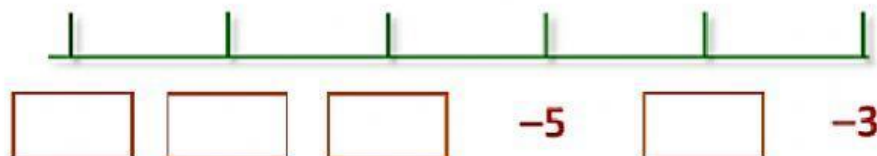
Q2- Put the numbers on the number line



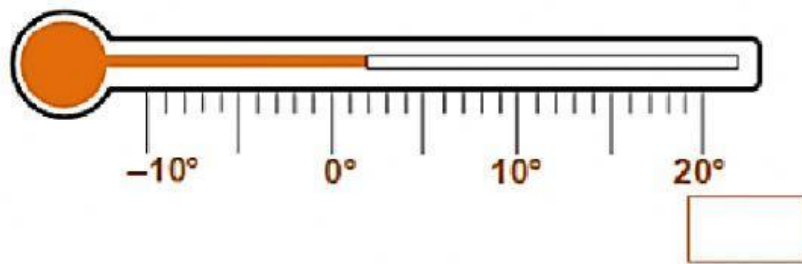
Q3- Put the numbers on the number line



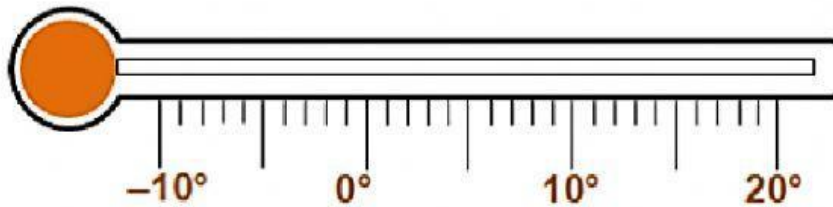
Q4- Complete the number line.



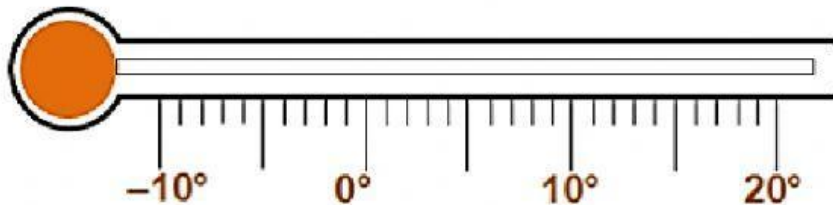
Q5- What is  $8^{\circ}\text{C}$  colder than the thermometer reading.



Q6- Today it is  $4^{\circ}\text{C}$ . Tomorrow it will be  $6^{\circ}\text{C}$  colder.  
Mark tomorrow's temperature on the thermometer.



Q7- Today it is  $13^{\circ}\text{C}$ . Tomorrow it will be  $16^{\circ}\text{C}$  colder.  
Colour tomorrow's temperature below.



Q8- Here is part of a number line.

It is divided into equal sections.

Write the missing numbers in the boxes.

