



Kurikulum
Merdeka

**MERDEKA
BELAJAR**

Merdeka
Mengajar



Lembar Kerja Peserta Didik



LKPD

MATEMATIKA KELAS 2

PENJUMLAHAN BILANGAN



Nama :

Kelas :

No. Absen :

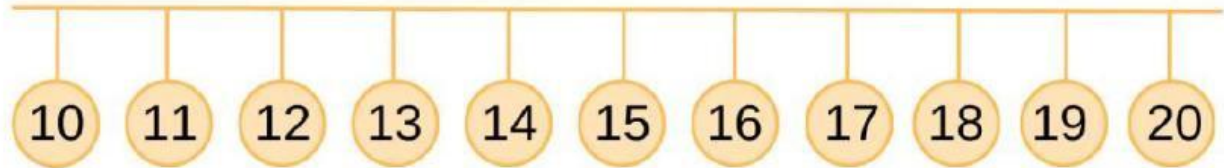
Nama :

Kelas :



OPERASI PENJUMLAHAN DENGAN CARA MENGHITUNG MAJU

Hitunglah operasi penjumlahan berikut dengan
menghitung maju.



$$10 + 6 =$$

$$12 + 4 =$$

$$15 + 4 =$$

$$15 + 4 =$$

$$11 + 6 =$$

$$10 + 9 =$$

$$14 + 3 =$$

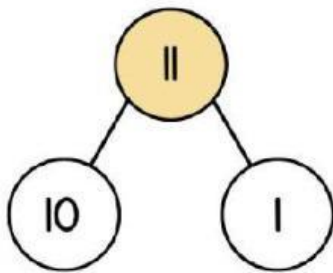
$$12 + 6 =$$

$$15 + 5 =$$

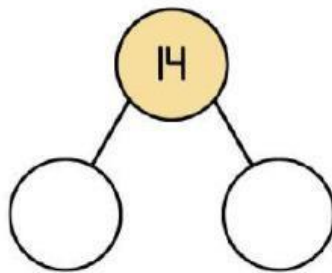
$$13 + 6 =$$

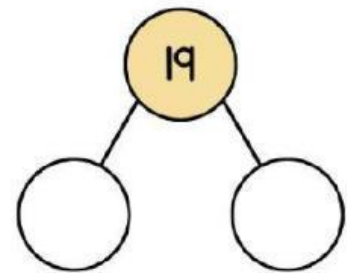
PASANGAN BILANGAN

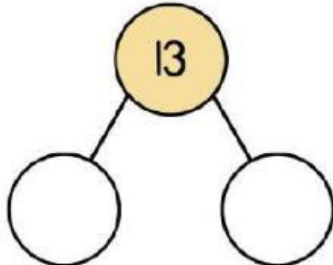
Tuliskan pasangan bilangan yang sesuai.

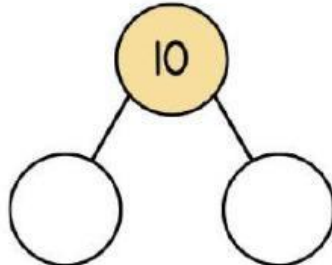


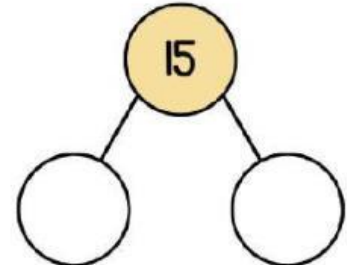
$$10 + 1 = 11$$

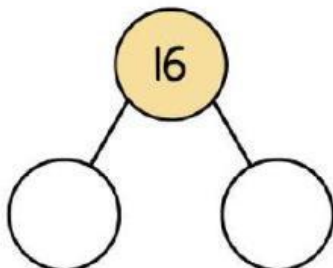


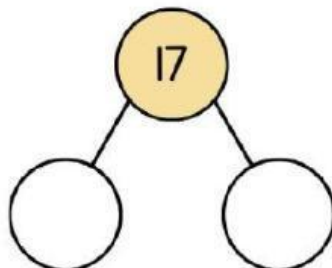


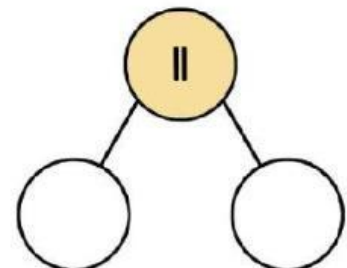















Nama :




Tanggal :




AYO BERHITUNG




Hitunglah hasil dari operasi penjumlahan dibawah ini dengan benar!

 $+$  $=$ 

 $+$  $=$ 

 $+$  $=$ 

 $+$  $=$ 

 $+$  $=$ 

Nama:

Kelas:

Penjumlahan Bersusun

Tentukan jumlah dari soal di bawah ini dan catat hasilnya.

$$\begin{array}{r} 10 \\ 2 \\ \hline \end{array} + \begin{array}{r} 15 \\ 4 \\ \hline \end{array} + \begin{array}{r} 17 \\ 3 \\ \hline \end{array} + \begin{array}{r} 14 \\ 4 \\ \hline \end{array}$$

$$\begin{array}{r} 11 \\ 8 \\ \hline \end{array} + \begin{array}{r} 12 \\ 2 \\ \hline \end{array} + \begin{array}{r} 17 \\ 2 \\ \hline \end{array} + \begin{array}{r} 16 \\ 3 \\ \hline \end{array}$$

$$\begin{array}{r} 10 \\ 6 \\ \hline \end{array} + \begin{array}{r} 8 \\ 11 \\ \hline \end{array} + \begin{array}{r} 6 \\ 12 \\ \hline \end{array} + \begin{array}{r} 13 \\ 4 \\ \hline \end{array}$$