






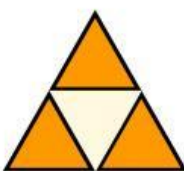



Nama : \_\_\_\_\_

Kelas : \_\_\_\_\_

# PECAHAN

Lingkari pecahan yang sesuai dengan bagian yang diarsir pada setiap bentuk dari pilihan yang tersedia.

1)		$\frac{1}{6}$ $\frac{3}{4}$ $\frac{2}{4}$ $\frac{3}{6}$ $\frac{2}{6}$
2)		$\frac{2}{7}$ $\frac{3}{8}$ $\frac{4}{7}$ $\frac{1}{5}$ $\frac{5}{7}$
3)		$\frac{3}{5}$ $\frac{4}{5}$ $\frac{5}{6}$ $\frac{3}{5}$ $\frac{4}{6}$
4)		$\frac{6}{8}$ $\frac{5}{6}$ $\frac{6}{4}$ $\frac{5}{8}$ $\frac{4}{6}$
5)		$\frac{1}{6}$ $\frac{2}{6}$ $\frac{2}{7}$ $\frac{3}{6}$ $\frac{2}{5}$
6)		$\frac{3}{8}$ $\frac{2}{6}$ $\frac{3}{3}$ $\frac{2}{8}$ $\frac{3}{6}$
7)		$\frac{1}{2}$ $\frac{2}{3}$ $\frac{1}{3}$ $\frac{2}{2}$ $\frac{2}{4}$
8)		$\frac{3}{4}$ $\frac{1}{3}$ $\frac{2}{3}$ $\frac{2}{4}$ $\frac{3}{3}$
9)		$\frac{4}{8}$ $\frac{5}{7}$ $\frac{2}{8}$ $\frac{3}{7}$ $\frac{2}{7}$