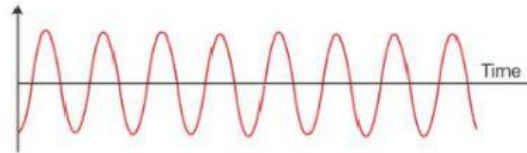



Name

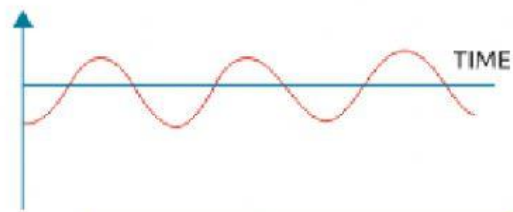
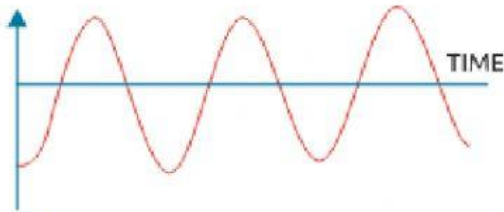
Date

Sound Energy

Identify if the following sound waves have low pitch or high pitch.



Identify also the loudness of the sound produced by looking at the sound wave.



Tell if the sound waves are produced by a pleasant sound or a noise.

