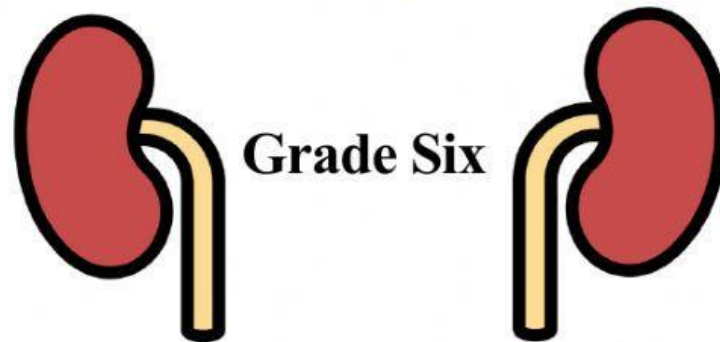




Science Department

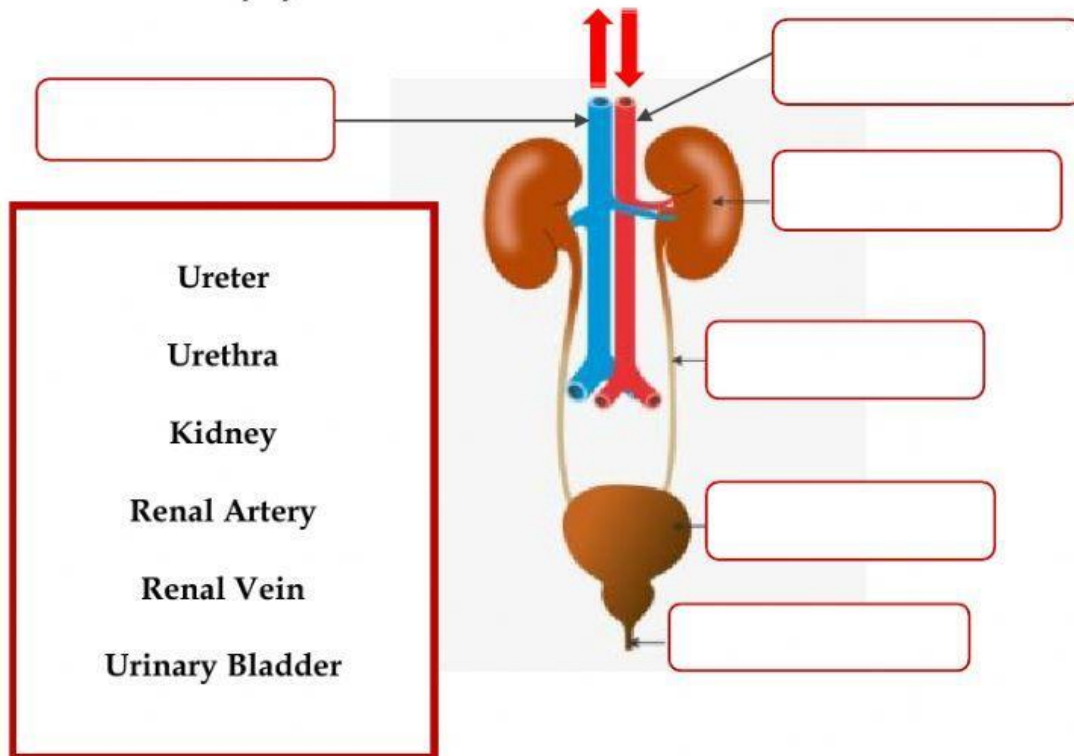


URINARY SYSTEM



T: Layal Shehayeb Abo Dargham

1) Label the urinary system:



2) Complete the following statements with the right answer.

- Blood flows to each kidney through the _____.
- Inside the kidney, the blood is _____ and the urine is formed from excess _____, excess _____ and _____ brought by the blood.
- The two _____ drain the urine to the bladder where it accumulates. When the bladder fills, the urine will be evacuated _____ the body through the _____.
- Blood leaves the kidneys through the _____.

3) **Indicate** the path of urine from its formation to its evacuation. Drag the words from the box.

Bladder – ureters – urethra – kidneys

_____ → _____ → _____ → _____

4) **Match** each organ of the urinary system to its role.

Kidney •


Ureter •

Bladder •

Urethra •

- place where urine accumulates
- filters the blood and is the place where urine is formed
- drains urine outside the body
- conducts urine to the bladder

Be Healthy to keep



your Kidneys Healthy