

**INSPIRED TOTS EARLY LEARNING CENTER**  
**3RD GRADE 1ST TERM CONTINUOUS ASSESSMENT, 2025/2026**

**NAME:** \_\_\_\_\_ **DATE:** \_\_\_\_\_  
**QUANTITATIVE** **GRADE 3**

1. Arrange these numbers in ascending order

132, 139, 139, 203, 232, 122, 131, 133, 134, 143.

\_\_\_\_\_

2). Arrange these numbers in descending order.

234, 546, 534, 236, 764, 123, 208, 342, 276, 435

\_\_\_\_\_

A	B	C	D	E	F	G	H	I	J	K	L	M
↓	↓	↓	↓	↓	↓	↓	↓	↓	↓	↓	↓	↓
1	2	3	4	5	6	7	8	9	10	11	12	13

Answer the following question using the codes above

3. E-C \_\_\_\_\_ 4.  $\frac{LEAFJ}{B}$  \_\_\_\_\_ 5. DGF ÷ \_\_\_\_\_ 6.  $\frac{JKL}{K}$

\_\_\_\_\_ 7.  $\frac{BF}{5}$  \_\_\_\_\_ 8. C G M = \_\_\_\_\_ 9. H E = \_\_\_\_\_

10. L E A F = \_\_\_\_\_

Complete the following

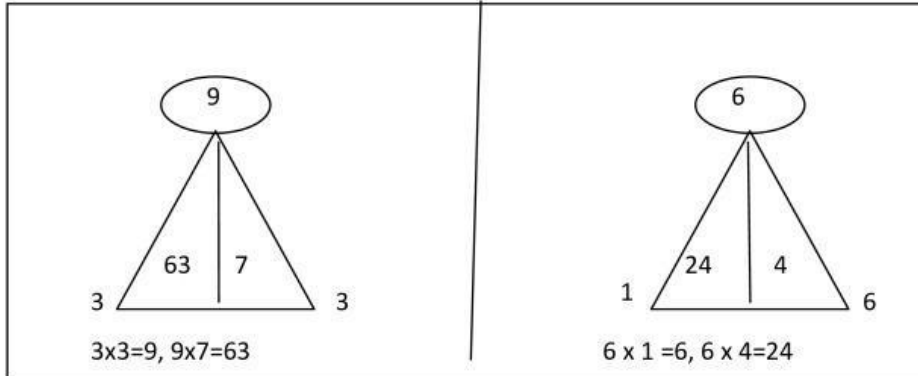
$\frac{1}{8}$	$\frac{1}{16}$	$\frac{?}{?}$	$\frac{1}{32}$	$\frac{1}{40}$	$\frac{1}{8}$
8,	9,	_____	11,	12,	13
16e,	20e,	24e,	28e,	_____	36e
2,	1,	$\frac{1}{2}$	$\frac{1}{4}$	$\frac{?}{?}$	$\frac{1}{16}$

**INSPIRED TOTS EARLY LEARNING CENTER**  
**3RD GRADE 1ST TERM CONTINUOUS ASSESSMENT, 2025/2026**

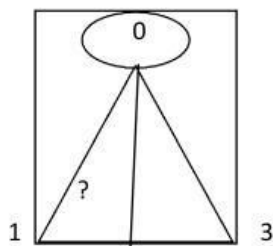
**NAME:** \_\_\_\_\_ **DATE:** \_\_\_\_\_

*Study the examples carefully and answer the question that follow and show all workings:*

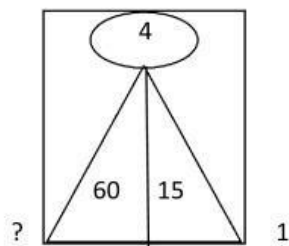
*Examples:*



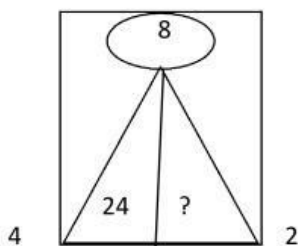
**(14)**



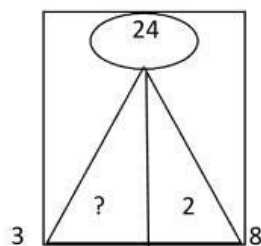
**(15)**



**(16)**



**(17)**

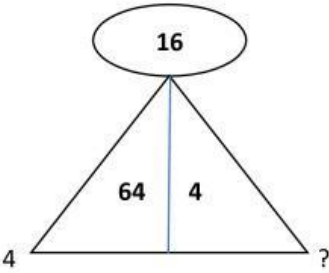
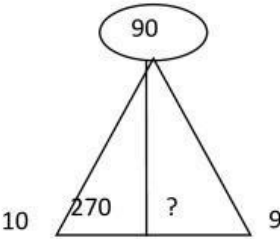


INSPIRED TOTS EARLY LEARNING CENTER  
1ST TERM CONTINUOUS ASSESSMENT, 2025/2026

3RD GRADE

NAME: \_\_\_\_\_  
(18)

DATE: \_\_\_\_\_  
(19)



(20)

