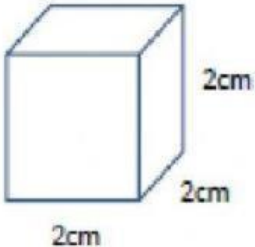
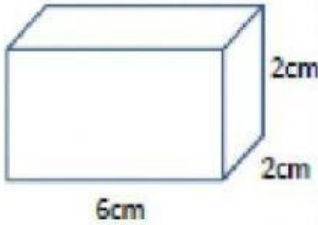

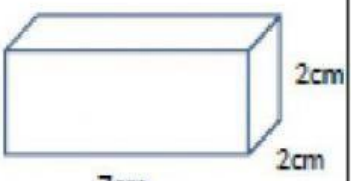
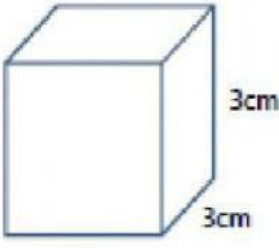
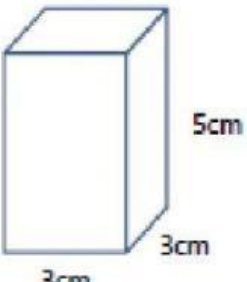
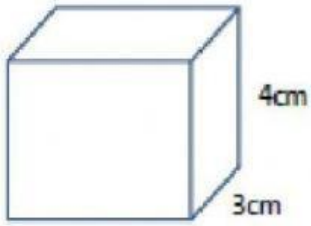
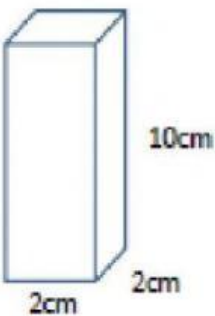
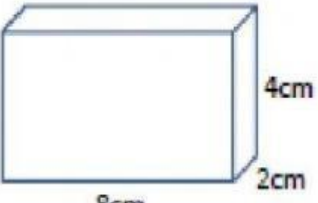


FIND THE VOLUME 2 (METRIC)

Find the volume of these rectangular prisms. They are not to scale!

 <p>2cm 2cm 2cm</p>	 <p>6cm 2cm 2cm</p>	 <p>8cm 2cm 1cm</p>
Volume = _____	Volume = _____	Volume = _____
 <p>7cm 2cm 2cm</p>	 <p>3cm 3cm 3cm</p>	 <p>5cm 3cm 3cm</p>
Volume = _____	Volume = _____	Volume = _____
 <p>4cm 3cm 5cm</p>	 <p>10cm 2cm 2cm</p>	 <p>4cm 2cm 8cm</p>
Volume = _____	Volume = _____	Volume = _____