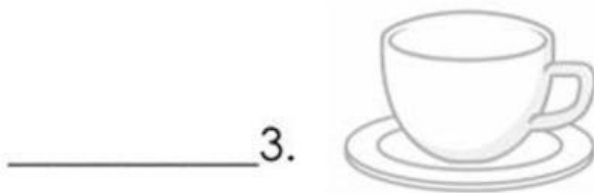
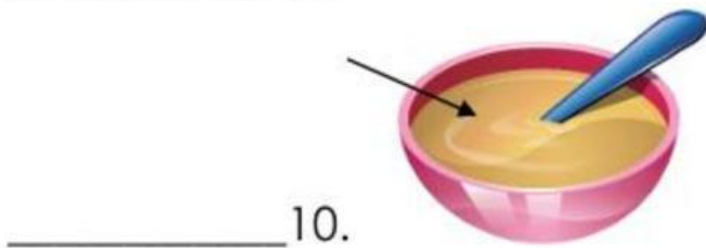
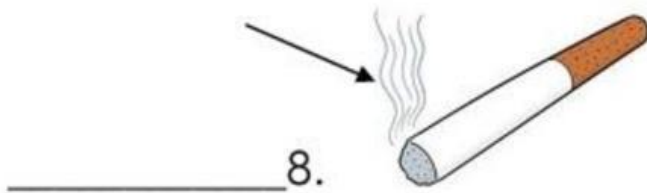
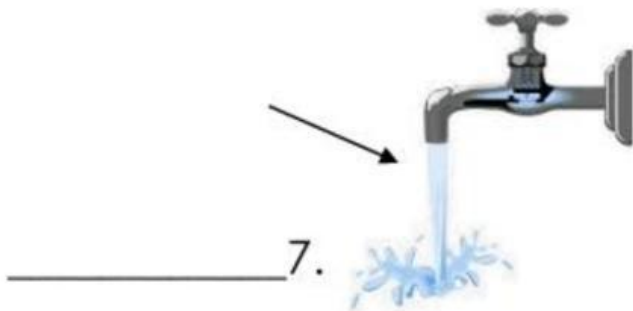
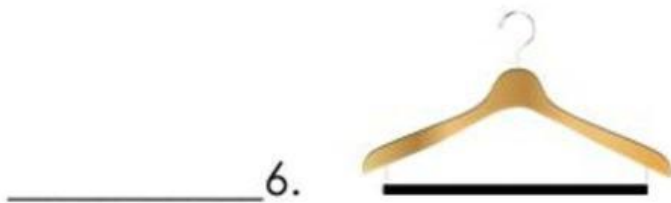
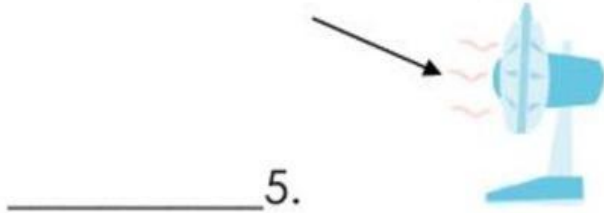
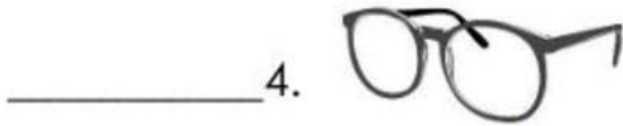


● **Exercise 1**

Look at each picture and write **Solid**, **Liquid** or **Gas** on the blank





● **Exercise 2**

Determine if the statement about solid, liquid and gases are true or false.

1. The two states of matter you can see are liquid and solid. _____
2. Solid can change their shape depending on the container that they are in. _____
3. There are 4 states of matter. _____
4. You can't see most gases. _____
5. Liquid can change their shape depending on the container that they are in. _____

● **Exercise 3**

List down at least three (3) names of solid, liquid, and gas that you can see inside your house.

Solid

Liquid

Gas
