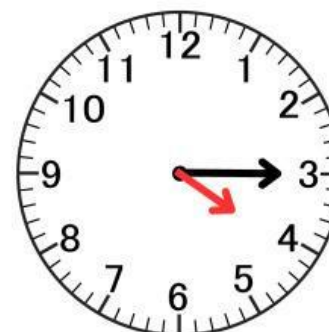
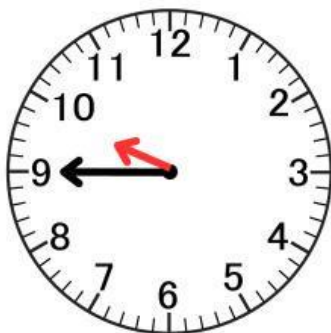
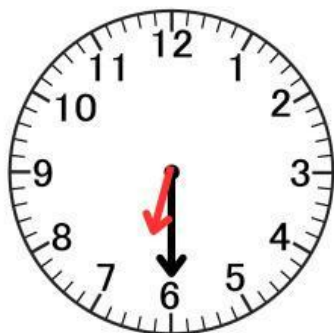


Name : _____

Date : _____

WHAT'S THE TIME?

Look at the clock. Drag and drop the correct time under each clock.



It's ten past three.

It's eight o'clock.

It's quarter to ten.

It's half past six.

It's twenty to two.

It's quarter past four.