

Mata Pelajaran : IPA

Nama Guru : Rafvenia, S.Pd.

Nama Siswa :

Kelas :







Hari dan Tanggal :



PERPINDAHAN KALOR

Lengkapi bagian ruang yang kosong dalam tabel dengan menjawab apakah gambar tersebut termasuk dalam contoh : Konduksi / Konveksi / Radiasi.

| NO. | GAMBAR | JENIS PERPINDAHAN KALOR |
|-----|--|-------------------------|
| 1 | An illustration of clothes hanging on a wooden rack outdoors. The sun is shining brightly in the sky, and there are some flowers in the background. | |
| 2 | An illustration showing a hand holding a metal rod that is heated at one end by a flame. Arrows indicate the direction of heat transfer along the rod. | |
| 3 | An illustration showing two hands held near a fire. Wavy arrows labeled "Radiasi" (Radiation) point from the fire towards the hands. | |
| 4 | An illustration of a pot of water boiling on a stove. Steam is rising from the pot. | |

| | | |
|-----|---|--|
| 5 |  | |
| 6 |  | |
| 7 |  | |
| 8 |  | |
| 9 |  | |
| 10. |  | |