

1. Write bending, heating or cooling.

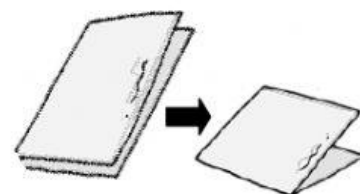
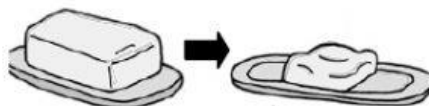
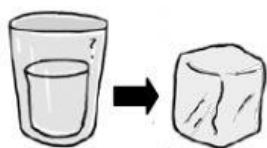


2. Circle.

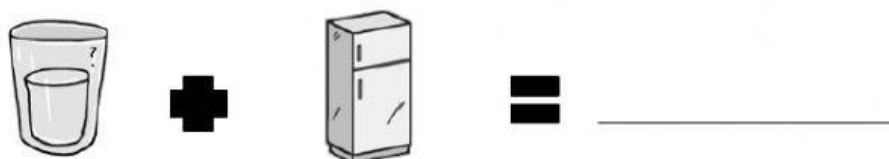
green = bending

blue = cooling

red = heating



3. Write solid, liquid or gas.



4. Match the pictures where water is in the same state.



5. Write the state of water in each picture.





6. Classify.



lemonade



stone



spoon



cloud



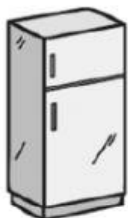
milk



vapour

| SOLID | LIQUID | GAS |
|-------|--------|-------|
| _____ | _____ | _____ |
| _____ | _____ | _____ |

1. Write bending, heating or cooling.



cooling



bending



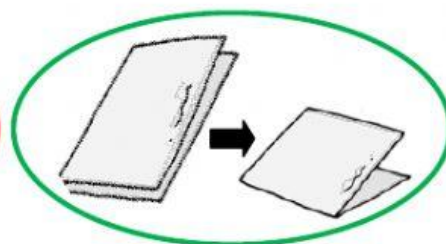
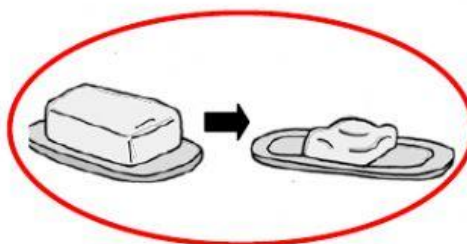
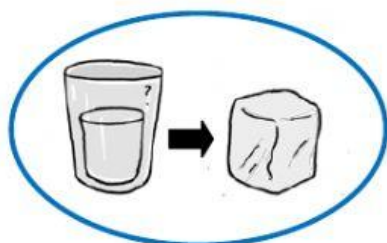
heating

2. Circle.

green = bending

blue = cooling

red = heating



3. Write solid, liquid or gas.



=

liquid



+



=

gas




+



=

solid


4. Match the pictures where water is in the same state.



5. Write solid, liquid or gas.



6. Classify.



| SOLID | LIQUID | GAS |
|------------------------------|--------------------------------|-------------------------------|
| <u>stone</u> <u>spoon</u> | <u>lemonade</u> <u>milk</u> | <u>cloud</u> <u>vapour</u> |

