

Bismillahirrahmanirrahiim



Name :

Grade :

Date :

Solving Multiplication Word Problems

Let's learn together

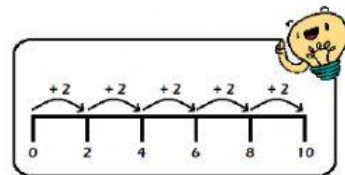
There are 2 carrots in each bunch.

How many carrots are there in 5 bunches?



$$5 \times 2 = 10$$


There are 10 carrots in 5 bunches.



Let's do the worksheet

Answer the questions below.

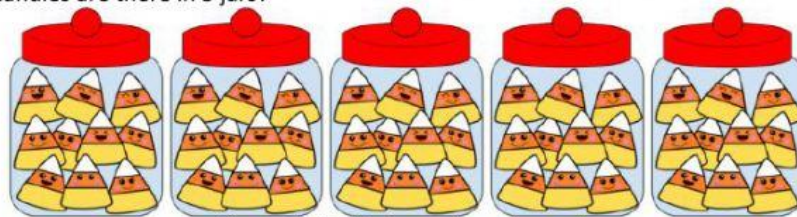
1. A chick has 2 legs.
How many legs do 8 chicks have?



$$\square \times \square = \square$$

8 chicks have ____ legs.

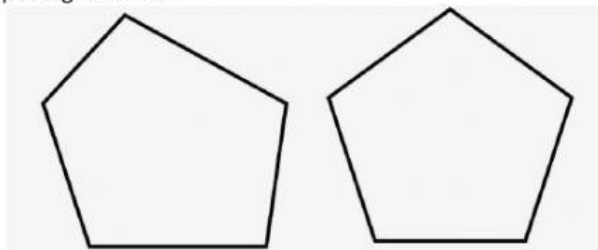
2. There are 10 candies in a jar.
How many candies are there in 5 jars?



$$\square \bigcirc \square = \square$$

There are ____ candies in 5 jars.

3. A pentagon has 5 sides.
How many sides do 2 pentagons have?



$$\square \bigcirc \square = \square$$

2 pentagons have ____ sides.

4. Tika bought 8 rolls of ropes
Each roll of rope was 5 m long.
How many metres of ropes did she buy altogether?

$$\square \bigcirc \square = \square$$

She bought _____ m of ropes altogether.

5. A pair of hands has 10 fingers.
How many fingers are there on 8 pairs of hands?

$$\square \bigcirc \square = \square$$

There are _____ fingers on 8 pairs of hands.

Alhamdulillaahirobbil 'aalamiin