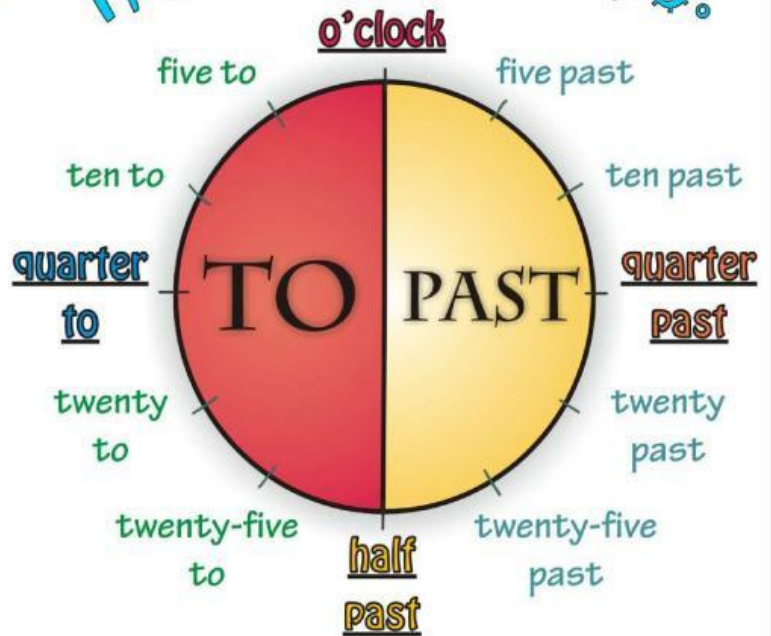


Telling the time (2)

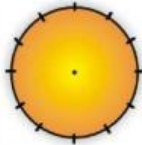
What's the time? It's half past two.

CIRCLE THE CORRECT ANSWER:

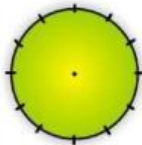
- It's quarter past seven.
A. 7.15 B. 7.45 C. 8.15
- It's twenty-five to ten.
A. 9.25 B. 10.25 C. 9.35
- It's half past six.
A. 6.30 B. 7.30 C. 5.30
- It's five past four.
A. 3.55 B. 4.05 C. 5.04
- It's ten to nine.
A. 9.10 B. 9.51 C. 8.50



DRAW TIMES:



It's half past seven.



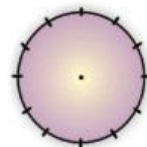
It's twenty past five.

MATCH:

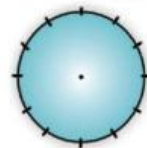
It's half past ten.	3.10
It's five to nine.	7.40
It's twenty to eight.	5.50
It's quarter past eleven.	10.30
It's twenty-five past seven.	11.15
It's ten to six.	7.25
It's ten past three.	1.45
It's quarter to two.	8.55

WRITE SENTENCES:

- 12.00
- 6.30
- 4.15
- 1.45
- 8.10
- 11.50
- 6.40
- 3.20
- 5.25



It's quarter to six.



It's ten to ten.

