

TRƯỜNG TIỂU HỌC TỰ THỰC TRI THỨC

BÀI KIỂM TRA TUYỂN SINH

Họ và tên:

Môn: Tiếng Anh - Thời gian: 75 phút

Lớp

Khối 3 – Lớp Song ngữ

MÃ ĐỀ : 01

Năm học : 2025 - 2026

LISTENING (30 pts)	READING - WRITING (50 pts)	SPEAKING (20 pts)	TOTAL	MATHS	GPA

LISTENING





Question 1: Listen and write 5 letters (nghe và viết 5 chữ cái). (10 points)

1. 2. 3. 4. 5.

Question 2: Listen and write numbers (nghe và viết số). (10 points)

1. 2. 3. 4. 5.

Question 3: Listen and draw lines. There is one example. (10 points)



READING & WRITING

Question 1: Read and choose the correct answer. (10 points)

1. Odd one out

A. swimming B. dancing C. drawing D. morning

2. Find the mistake: **What is Linh doing? – She is play with a rabbit.**

A. What B. play C. she D. is

3. The blanket is _____ the table.



A. on B. in C. near D. next to

4. Is the blanket in the tent?

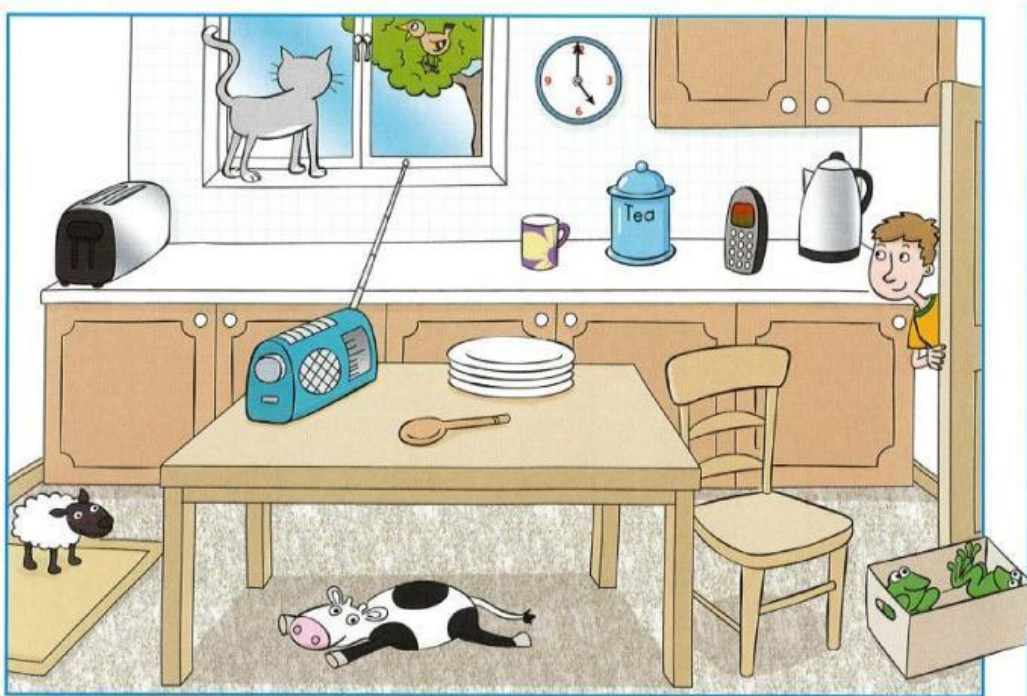


A. Yes, it is B. No, it is C. No, it isn't D. Yes, it isn't

5. What are you wearing? – I'm wearing glasses.



Question 2: Look, read, and write YES or NO (nhìn, đọc và viết YES hoặc NO) (10 points)



1. There's a sheep under the mat.

2. There's a cow in the box.

3. There's a cup on the table.

4. There are two frogs in the box.

5. There's a table next to the chair.

Question 3: Look, read and draw lines (nhìn, đọc và nối) (10 points)



1. Is there an ox?	A. Yes, there is.
2. Is the boy reading a book?	B. No, there isn't.
3. Is he watching TV?	C. No, he isn't.
4. Is there a bag?	D. No, it isn't.
5. Is it a kitchen?	E. Yes, he is.

1-	2-	3-	4-	5-
----	----	----	----	----

Question 4: Look and write. (10 points)



i o n k o c g



g o y u t r



w o d i n w



i n e k h c c



p i n p e a l p e

Question 5: Reorder. (10 points)

1. are / Hello, / you? / Jane. / How

.....

2. spell / How / name? / do / you / your

.....

3. and flying / I / kite. / a / like / soccer / playing

.....

4. shorts and / socks? / the / Where / are / the

.....

5. kittens / There / five / the / backyard. / in / are

.....

SPEAKING (20 points) (phần này không làm)

PART 1				
1	2	3	4	5

PART 2				
1	2	3	4	5

MATHS SECTION

Question 1: Look, read, and circle A, B, or C. (30 points)

1. Four hundred and fifty-nine plus two hundred and eighty-three equals seven hundred and forty-two

A. $459 + 283 = 752$ B. $495 + 283 = 778$ C. $459 + 238 = 697$ D. $459 + 283 = 742$

2. There are three bags. Each bag has five apples. How many apples are there in total?

A. five times three B. three minus five

C. five plus three D. fifteen divided by three

3.

$815 - 469 = 346$

A. Five hundred and fifty plus four hundred and sixty-nine equals three hundred and forty-six.

B. Eight hundred and fifteen minus four hundred and sixty-nine equals three hundred and forty-six.

C. Eight hundred and fifteen minus four hundred and sixty equals three hundred and forty-six.

D. Six hundred and fifteen plus four hundred and sixty-nine equals four hundred and forty-six.

4. Twenty-eight divided by _____ equals seven.

A. five

B. four

C. two

D. three

5. Mom buys twenty-eight cupcakes. I eat seventeen cupcakes. How many cupcakes are left?

A. thirteen

B. forty-five

C. eleven

D. thirty-five

6. What number and letter is it?

$$\begin{array}{r} 112 \\ +113 \\ \hline \end{array}$$

225

M

$$\begin{array}{r} 540 \\ -350 \\ \hline \end{array}$$

?

?

C	D	E	F	G	H	I	J
245	250	642	525	350	190	160	632
P	Q	R	S	T	U	V	W
325	125	135	759	805	742	290	340

A. 190 and H

B. 160 and I

C. 759 and S

D. 125 and Q

Question 2: Put a tick (✓) or a cross (✗). Then correct where necessary (10 points)

$9 + 3 = 12$



Correct

$17 - 8 = 10$



17-8=9

$24 + 58 = 72$



$22 + 78 = 90$



$75 - 39 = 36$



$69 + 12 = 82$



$15 - 7 = 8$



Question 3: Fill in the blanks with numbers. (10 points)

..... minus 24 equals 36

36 divided by equals 9

..... plus 47 equals 62

30 divided by 5 equals

3	times	equals	27
---	-------	-------	--------	----

Question 4: Read, write, and divide. (10 points)

Four divided by four

$$\boxed{4} \bigcirc \boxed{4} = \boxed{1}$$

Thirty divided by five

$$\boxed{} \bigcirc \boxed{} = \boxed{}$$

Twenty-eight divided by four

$$\boxed{} \bigcirc \boxed{} = \boxed{}$$

Four times nine

$$\boxed{} \bigcirc \boxed{} = \boxed{}$$

Fourteen divided by two

$$\boxed{} \bigcirc \boxed{} = \boxed{}$$

Three times seven

$$\boxed{} \bigcirc \boxed{} = \boxed{}$$

Question 5: Word problems. (10 points)

Lan, Minh, Nhi have five pears each. How many pears do they have in total?

$$\boxed{} \bigcirc \boxed{} = \boxed{} \text{ (.....)}$$

They have pears in total.

Question 6: Word problems. (10 points)

I give thirty-two cookies to my two sisters and two friends. How many cookies do they have each?

$$\boxed{} \bigcirc \boxed{} = \boxed{} \text{ (.....)}$$

They have cookies each.

Question 7: Fill in the blank with the suitable number below. (10 points)

100	200	300	400	500	600
-----	-----	-----	-----	-----	-----

- a) is bigger than 500
- b) 200 is bigger than
- c) $300 < \dots < 500$
- d) 600 and 500, which is smaller? is smaller.
- e) 300 and 200, which is bigger? is bigger.

Question 8: Write the numbers in word forms (viết các số sau ở dạng chữ số) **(10 points)**

a) 28

b) 548

c) 912

d) 33

e) 755

GOOD LUCK !