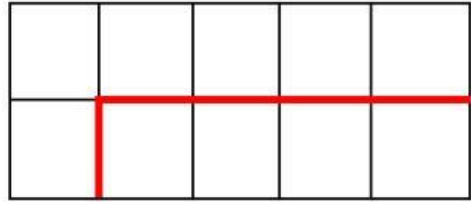
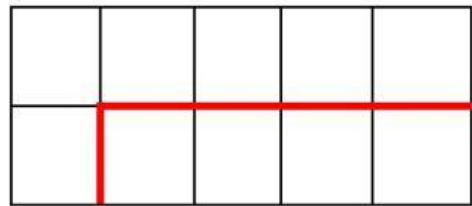


# DIVISION

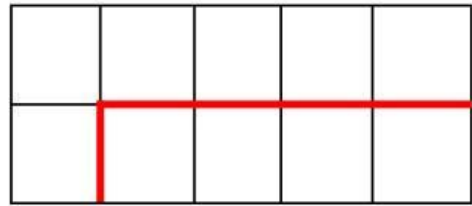
If a teacher has 40 students and wants to divide them into groups of 2, how many groups will there be?



A cake has 28 slices and you want to divide it between 2 people, how many slices will each person get?



A bag of candy contains 240 pieces you want to divide it into 2 equal groups, how many pieces will be in each group



Matt baked 648 cupcakes. If the cupcakes were divide into 2 equal groups, how many cupcakes will be in each group

