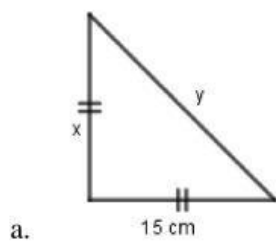


Nama Anggota Kelompok :

.....  
.....  
.....  
.....

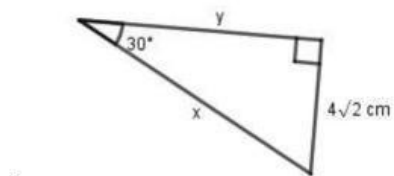
Kerjakanlah soal berikut dengan menggunakan perbandingan sisi segitiga siku-siku istimewa

1. Tentukan nilai  $x$  dan  $y$  dari gambar berikut



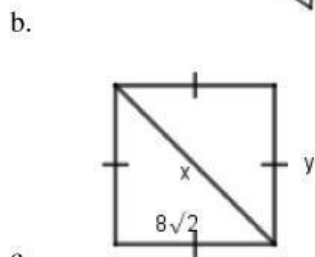
Nilai  $x$  =

Nilai  $y$  =



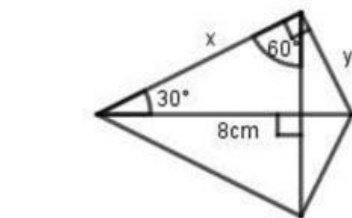
Nilai  $x$  =

Nilai  $y$  =



Nilai  $x$  =

Nilai  $y$  =



Nilai  $x$  =

Nilai  $y$  =