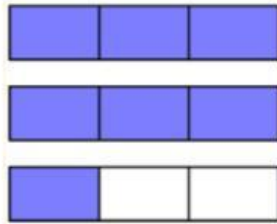
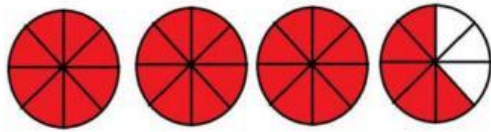




NAME \_\_\_\_\_ GRADE: \_\_\_\_\_ DATE: 28/04/25

1. Write the correct fraction that represent each situation.



2. Represent each fractions with the correct situation.

$$\frac{7}{6}$$

$$\frac{4}{7}$$



3. Converting Improper Fractions to Mixed Numbers.

$$\frac{29}{5} =$$

$$\frac{53}{10} =$$

$$\frac{38}{6} =$$

4. Converting Mixed Numbers to Improper Fractions.

$$4 \frac{3}{4} =$$

$$8 \frac{9}{12} =$$

$$9 \frac{2}{8} =$$

3. The number on the top of a fraction is called:


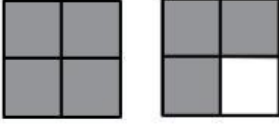
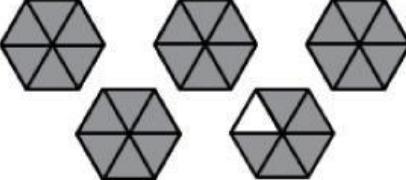
- a) Denominator
- b) Numerator

4. The number on the down of a fraction is called:

- a) Denominator
- b) Numerator



5. Write the mixed number and improper fraction for the shaded area of each picture.

		
	<b>Mixed Number</b>	<b>Improper Fraction</b>
		
	<b>Mixed Number</b>	<b>Improper Fraction</b>
		
	<b>Mixed Number</b>	<b>Improper Fraction</b>