

Nama:

Kelas:

PENJUMLAHAN DENGAN KODE

Tulis hasil penjumlahan lingkaran berwarna
seesuai dengan kode angka berikut ini!



$$\text{Blue Circle} + \text{Pink Circle} = \boxed{3}$$

$$\text{Yellow Circle} + \text{Green Circle} = \boxed{}$$

$$\text{Pink Circle} + \text{Red Circle} = \boxed{}$$

$$\text{Blue Circle} + \text{Green Circle} = \boxed{}$$

MARI BERHITUNG



Hitunglah hasil penjumlahan dan pengurangan di bawah ini sesuai dengan gambar

$$\begin{array}{c} \text{Basket of leafy greens} \\ + \\ \text{Basket of 3 eggplants} \\ = \\ \boxed{5} \end{array}$$

$$\begin{array}{c} \text{Basket of 4 leafy greens} \\ - \\ \text{Basket of 2 tomatoes} \\ = \\ \boxed{} \end{array}$$

$$\begin{array}{c} \text{Basket of 3 broccoli florets} \\ + \\ \text{Basket of 1 red pepper} \\ = \\ \boxed{} \end{array}$$

$$\begin{array}{c} \text{Basket of 5 potatoes} \\ - \\ \text{Basket of 3 carrots} \\ = \\ \boxed{} \end{array}$$

Berhitung 1 Sampai 10

Ayo hitung dan pasangkan dengan bilangan yang tepat!



1

3

4

5

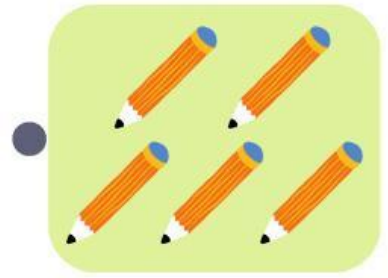
6

7

8








9

10



Berhitung & Hubungkan Gambar

Hitung berapa banyak sayuran yang ada dan cocokkan dengan jumlah yang benar!



ANGKA WARNA

Berilah angka pada lingkaran sesuai dengan kode warnanya.



Contoh:

Red circle, Blue circle, Yellow circle, Green circle, Cyan circle

1 5 2 3 4

Yellow circle, Cyan circle, Red circle, Blue circle, Green circle

○ ○ ○ ○ ○

Blue circle, Red circle, Yellow circle, Cyan circle, Green circle

○ ○ ○ ○ ○

Red circle, Yellow circle, Cyan circle, Green circle, Blue circle

○ ○ ○ ○ ○

Cyan circle, Blue circle, Yellow circle, Green circle, Red circle

○ ○ ○ ○ ○

Blue circle, Green circle, Cyan circle, Yellow circle, Red circle

○ ○ ○ ○ ○

Green circle, Cyan circle, Red circle, Blue circle, Yellow circle

○ ○ ○ ○ ○

Yellow circle, Cyan circle, Blue circle, Red circle, Green circle

○ ○ ○ ○ ○