

## **SCIENCE REVISION – YEAR 5**

### **1. Write definitions for the following terms:**

a. transparent objects : Objects that allow light to pass through.

*example:*

b. translucent objects : Objects that allow light to pass through.











*example:*

c. opaque objects : Objects that allow light to pass through.

*example:*

### **2. Answer the following questions.**

a. Classify the vertebrates below according to their groups.

snake 	penguin 	tortoise 	guppy 	tiger 
stingray 	frog 	salamander 	whale 	ostrich 

b. Which group of animals give birth to their young alive? \_\_\_\_\_

### **3. Label parts of the fungi below.**

