


A Good Crop

Skills:

Addition &
Subtraction
to 14

Find the answer that is the same as $3 + 3 + 3$.
Color that apple red. Color the other apples yellow.



Add Three Numbers

Skills:

Column
Addition

Number Words
to 14

$$\begin{array}{r} 6 \\ 4 \\ +3 \\ \hline \end{array}$$

$$\begin{array}{r} 2 \\ 8 \\ +1 \\ \hline \end{array}$$

$$\begin{array}{r} 5 \\ 2 \\ +2 \\ \hline \end{array}$$

$$\begin{array}{r} 1 \\ 6 \\ +5 \\ \hline \end{array}$$

$$\begin{array}{r} 3 \\ 8 \\ +2 \\ \hline \end{array}$$

$$\begin{array}{r} 7 \\ 0 \\ +5 \\ \hline \end{array}$$

$$\begin{array}{r} 4 \\ 4 \\ +4 \\ \hline \end{array}$$

$$\begin{array}{r} 9 \\ 0 \\ +4 \\ \hline \end{array}$$

$$\begin{array}{r} 1 \\ 5 \\ +6 \\ \hline \end{array}$$

$$\begin{array}{r} 3 \\ 4 \\ +5 \\ \hline \end{array}$$

Find the Number Words



1. zero
2. one
3. two
4. three
5. four
6. five
7. six
8. seven
9. eight
10. nine
11. ten
12. eleven
13. twelve
14. thirteen
15. fourteen

Fruity Fun

Skills:

Word Problems:
Addition &
Subtraction
to 14

What's Growing in the Garden?

Read. Find the sentence that isn't needed.
Mark it out. Write the problems. Answer them.

Dana planted 14 watermelon seeds.
9 of the watermelon seeds sprouted.

~~She ate a slice of watermelon.~~

How many watermelon seeds did **not** sprout?

5 seeds did not sprout.



$$\begin{array}{r} 14 \\ - 9 \\ \hline 5 \end{array}$$


There were 12 grapes in the bunch.
The grapes were delicious!
Gary ate 6 of the grapes.
How many grapes were left?

_____ grapes were left.



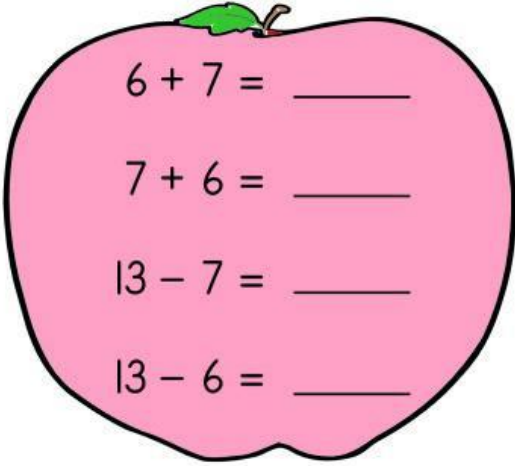
Bobby grew 7 plums and 5 raspberries.
The plums were purple.
How many plums and raspberries did
Bobby grow?

Bobby grew _____ plums and raspberries.



Skills:

Addition &
Subtraction
to 14

 $6 + 7 = \underline{\quad}$

$7 + 6 = \underline{\quad}$

$13 - 7 = \underline{\quad}$

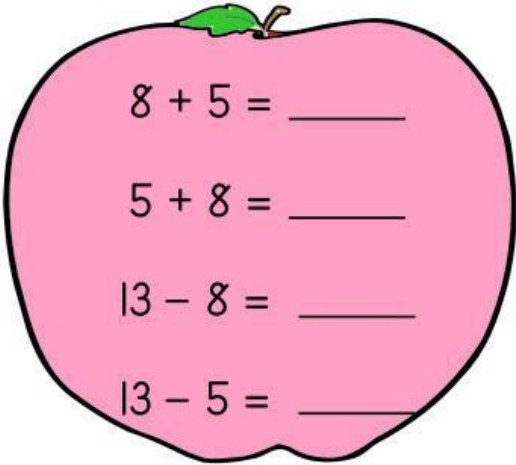
$13 - 6 = \underline{\quad}$

 $9 + 4 = \underline{\quad}$

$4 + 9 = \underline{\quad}$

$13 - 4 = \underline{\quad}$

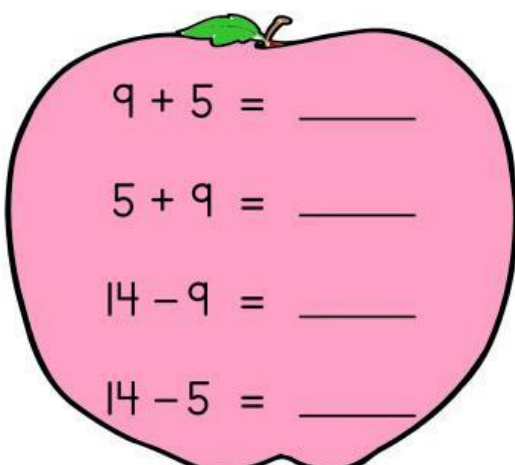
$13 - 9 = \underline{\quad}$

 $8 + 5 = \underline{\quad}$

$5 + 8 = \underline{\quad}$

$13 - 8 = \underline{\quad}$

$13 - 5 = \underline{\quad}$

 $9 + 5 = \underline{\quad}$

$5 + 9 = \underline{\quad}$

$14 - 9 = \underline{\quad}$

$14 - 5 = \underline{\quad}$

 $8 + 4 = \underline{\quad}$

$4 + 8 = \underline{\quad}$

$12 - 8 = \underline{\quad}$

$12 - 4 = \underline{\quad}$

 $8 + 6 = \underline{\quad}$

$6 + 8 = \underline{\quad}$

$14 - 6 = \underline{\quad}$

$14 - 8 = \underline{\quad}$

All About June

Skills:

Reading a
Calendar

Look at the calendar. Answer the questions.

JUNE

Sunday	Monday	Tuesday	Wednesday	Thursday	Friday	Saturday
		1	2	3	4	5
6	7	8	9	10 	11	12
13	14 	15	16	17	18	19
20	21	22	23	24	25 	26
27	28	29	30			

1. What is the name of this month?

2. How many days are in this month?

3. Flag Day is on what day?

4. There is a birthday on .

5. There is a soccer game on .

6. How many Tuesdays are in this month?


7. How many Saturdays are in this month?

What's Missing?

Skills:

Counting

Number Order



after

before

in between

21 22

46 47

29 30 31

39 ____

____ 50

43 ____ 45

45 ____

____ 36

38 ____ 40

50 ____

____ 64

51 ____ 53

64 ____

____ 21

67 ____ 69

77 ____

____ 92

80 ____ 82

99 ____

____ 63

87 ____ 89

Fruity Fun

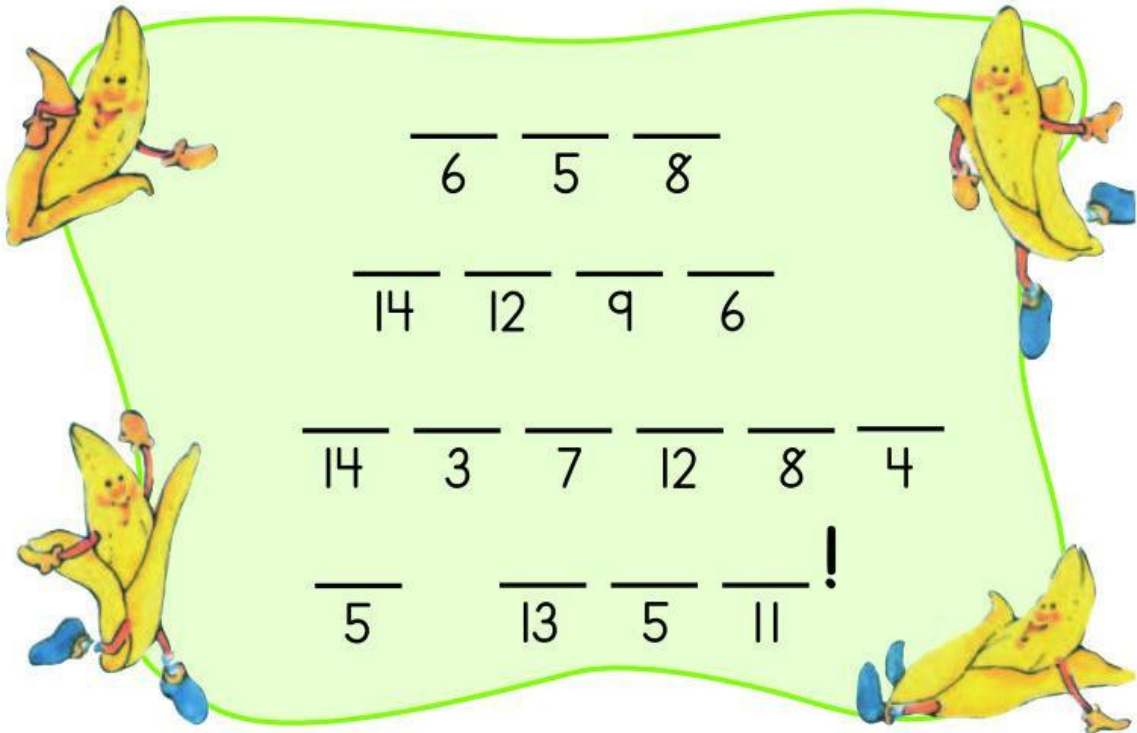


Talking Fruit

Skills:


Addition &
Subtraction
to 14

Barry Banana has a message for you.
Write the letter that goes with each number.



A	D	E	F	I
$\begin{array}{r} 14 \\ - 9 \\ \hline \end{array}$	$\begin{array}{r} 8 \\ + 5 \\ \hline \end{array}$	$\begin{array}{r} 13 \\ - 7 \\ \hline \end{array}$	$\begin{array}{r} 7 \\ + 7 \\ \hline \end{array}$	$\begin{array}{r} 9 \\ + 3 \\ \hline \end{array}$

R	S	T	U	V	Y
$\begin{array}{r} 11 \\ - 8 \\ \hline \end{array}$	$\begin{array}{r} 13 \\ - 9 \\ \hline \end{array}$	$\begin{array}{r} 13 \\ - 5 \\ \hline \end{array}$	$\begin{array}{r} 14 \\ - 7 \\ \hline \end{array}$	$\begin{array}{r} 14 \\ - 5 \\ \hline \end{array}$	$\begin{array}{r} 7 \\ + 4 \\ \hline \end{array}$







Farmer Fred's Fruit

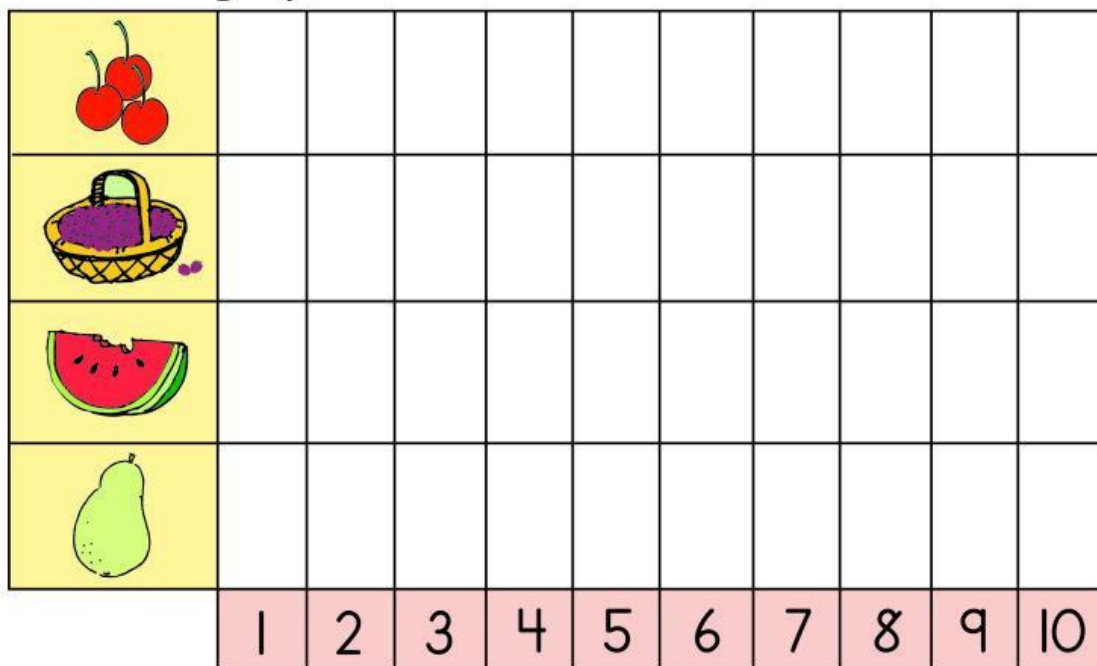
Farmer Fred likes to keep track of the fruit he sells at his stand. Here is what he sold last Saturday.

Skills:


Completing
and Reading
a Graph

8 bags of cherries  10 watermelons 
7 baskets of berries  5 pears 

Color the graph to show what Farmer Fred sold.



- How many more watermelons sold than pears? _____
- Which fruit sold the smallest amount? _____
- How many bags of cherries and baskets of berries? _____

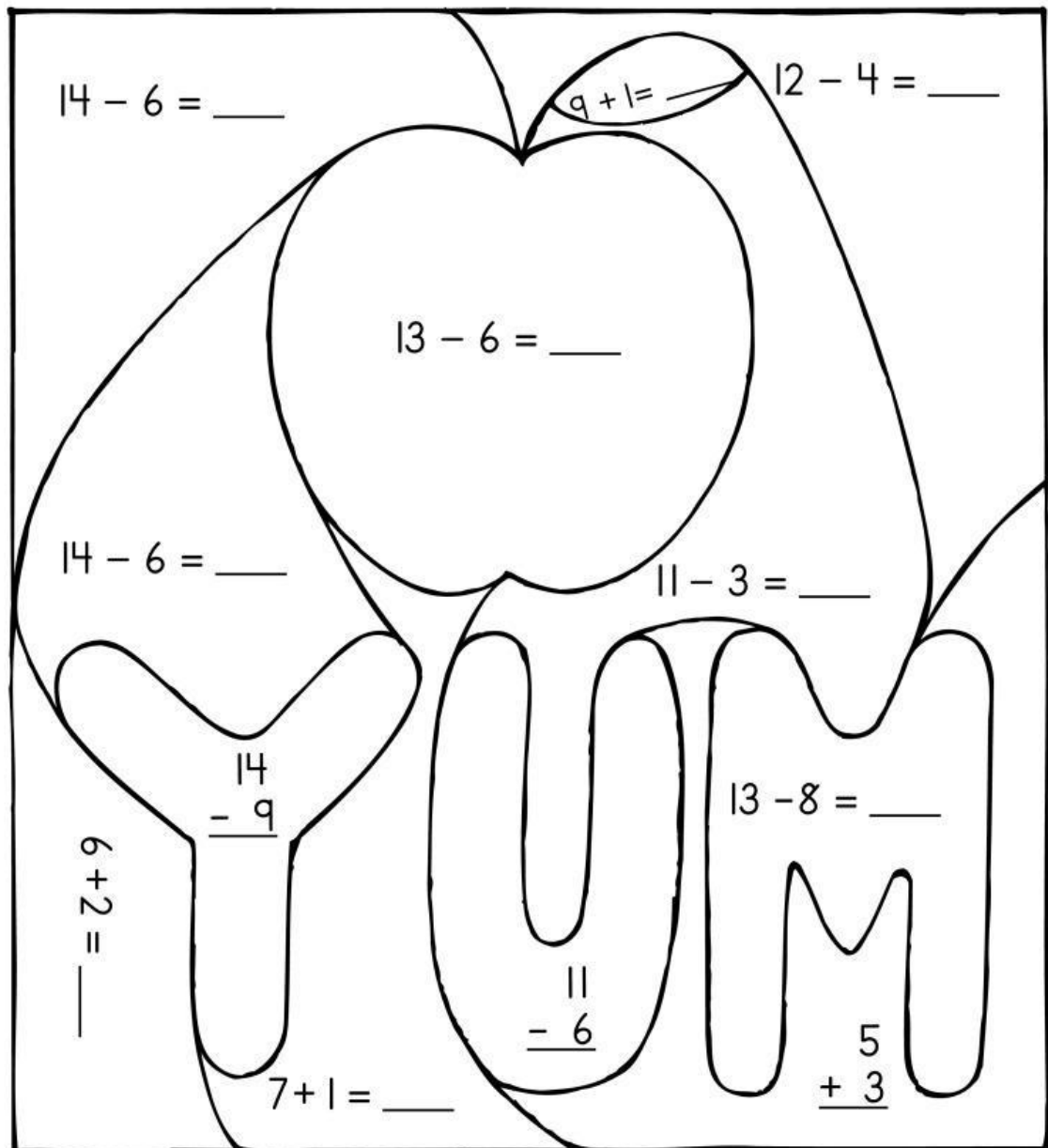


A Yummy Snack

Skills:

Addition &
Subtraction
to 14

Add and subtract. Color.



Count by Fives

Skills:

Counting by 5s

Count by 5s.



5











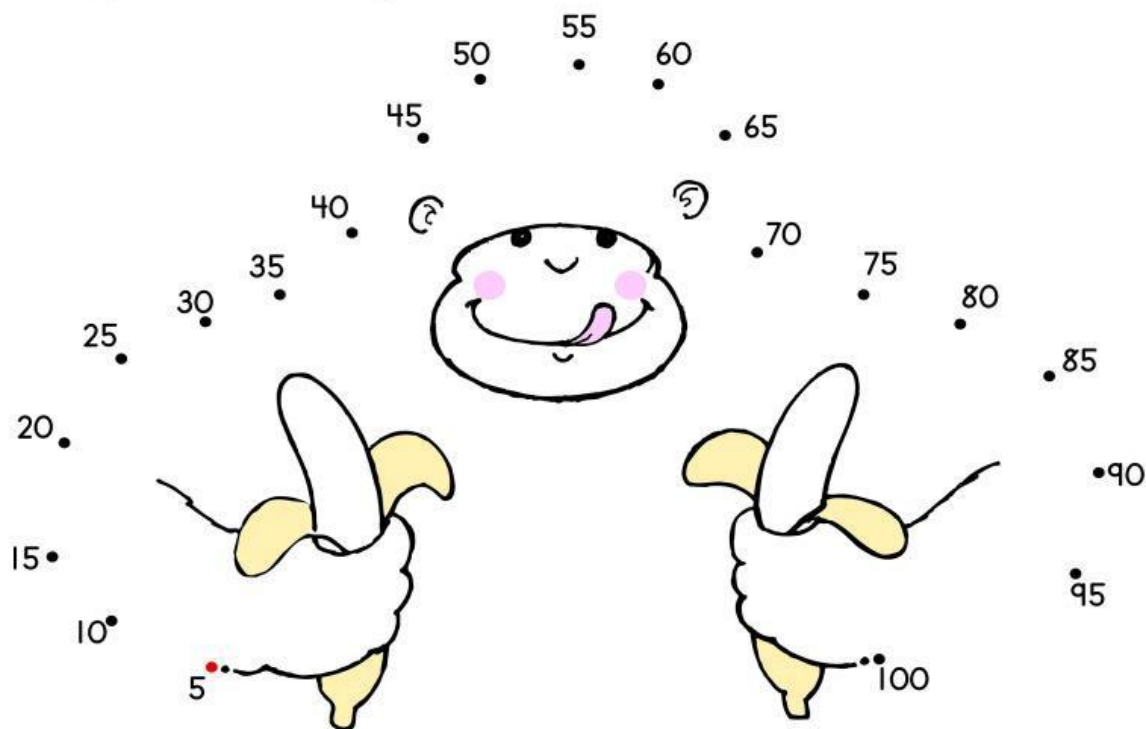








Connect the dots.



Greater Than, Less Than

Skills:

Greater Than,
Less Than

$>$ = greater than

$$8 > 7$$

$<$ = less than

$$7 < 8$$

$$7 \square 12$$

$$13 \square 20$$

$$18 \square 9$$

$$5 \square 15$$

$$14 \square 4$$

$$10 \square 0$$

Add or subtract. Write $>$ or $<$ in the \bigcirc .

$$9 + 5 \bigcirc 12 + 1$$

$$\boxed{14} \qquad \boxed{13}$$

$$8 + 5 \bigcirc 5 + 6$$

$$\boxed{} \qquad \boxed{}$$

$$3 + 7 \bigcirc 6 + 6$$

$$\boxed{} \qquad \boxed{}$$

$$5 + 4 \bigcirc 8 + 3$$

$$\boxed{} \qquad \boxed{}$$

$$13 - 8 \bigcirc 11 - 4$$

$$\boxed{} \qquad \boxed{}$$

$$14 - 7 \bigcirc 5 + 4$$

$$\boxed{} \qquad \boxed{}$$

$$7 + 6 \bigcirc 14 - 5$$

$$\boxed{} \qquad \boxed{}$$

$$12 - 7 \bigcirc 11 - 7$$

$$\boxed{} \qquad \boxed{}$$



Count by 5s.





Add.

$$\begin{array}{r} 6 \\ 4 \\ + 3 \\ \hline \end{array}$$

$$\begin{array}{r} 2 \\ 3 \\ + 1 \\ \hline \end{array}$$

$$\begin{array}{r} 4 \\ 3 \\ + 5 \\ \hline \end{array}$$

$$\begin{array}{r} 9 \\ 0 \\ + 4 \\ \hline \end{array}$$

Read the word. Fill in the circle under the number.

zero

7 0 2
○ ○ ○

eight

9 4 8
○ ○ ○

three

10 3 2
○ ○ ○