


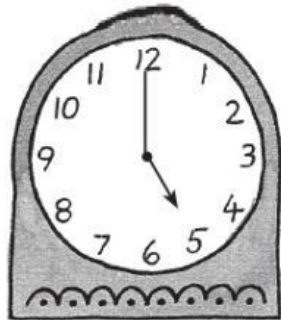
## MODULE 1: WELCOME - TIME (O'CLOCK AND HALF PAST)

► Choose the correct answer.




o'clock

half past



o'clock

half past




o'clock

half past




o'clock

half past



o'clock

half past




o'clock

half past



o'clock

half past



o'clock

half past



o'clock

half past



o'clock

half past