

# FRAZIONI

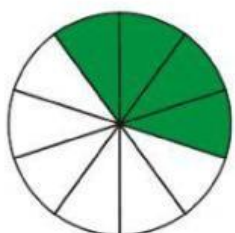
Scrivi la frazione che rappresenta la parte colorata:



— —



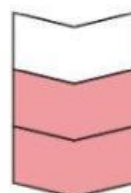
— —



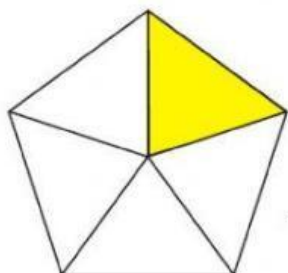
— —



— —



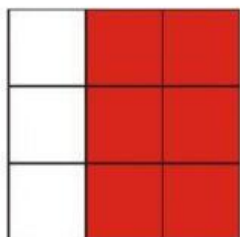
— —



— —




— —




— —



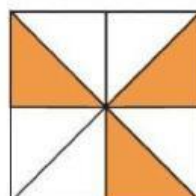
— —



— —



— —



— —