




Name: _____

ADDITION

Add the images. Draw a line between the total number of images on each box and the number on the right.



+



•

• 2



+



•

• 4




+



•

• 3




+



•

• 6



+

-

•

• 5