






Name: \_\_\_\_\_

Date: \_\_\_\_\_

## Practice Addition within 100 no regrouping

1. Match then find the sum.



	Tens	Ones
	2	4
+	5	0

	Tens	Ones
	3	4
+	6	5

	Tens	Ones
	7	1
+	1	3

	Tens	Ones
	4	2
+		5

Write the **addition sentence**. Find the **sum**.

2.  $33 + 14 = \underline{\quad}$       3.  $21 + 57 = \underline{\quad}$       4.  $62 + 30 = \underline{\quad}$

	Tens	Ones
+		

	Tens	Ones
+		

	Tens	Ones
+		

5. Choose the correct answer.

Anna has 23 flowers.

Then she picks 25 more flowers.

How many flowers does Anna have in all ?

Tens	Ones

☐ 28 flowers

☐ 48 flowers

☐ 75 flowers

☐ 84 flowers

6. Write the missing numbers.

	Tens	Ones
	1	5
+	<input type="text"/>	2
	7	<input type="text"/>

	Tens	Ones
	2	<input type="text"/>
+	<input type="text"/>	3
	8	6