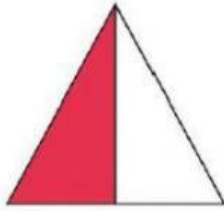


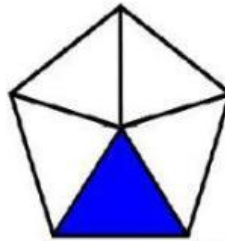
# FRACTIONS




What is the fraction of the shaded parts of the whole?  
Click the correct fractions.



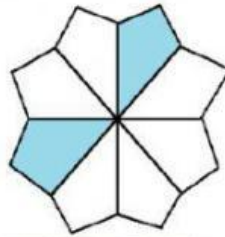
$\frac{1}{4}$     $\frac{1}{2}$



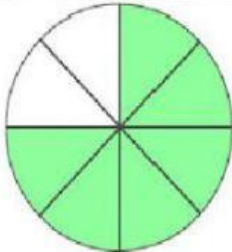
$\frac{1}{5}$     $\frac{1}{6}$




$\frac{2}{5}$     $\frac{3}{5}$



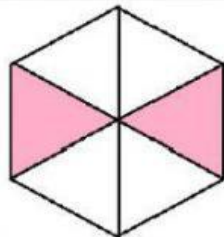
$\frac{2}{7}$     $\frac{2}{8}$



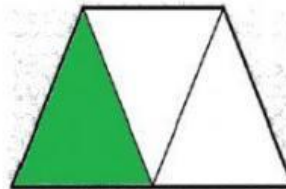
$\frac{2}{8}$     $\frac{6}{8}$



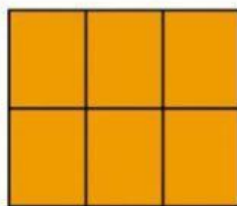
$\frac{5}{5}$     $\frac{5}{6}$



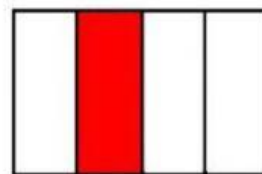
$\frac{2}{6}$     $\frac{4}{6}$



$\frac{3}{3}$     $\frac{1}{3}$



$\frac{1}{6}$     $\frac{6}{6}$



$\frac{1}{4}$     $\frac{3}{4}$