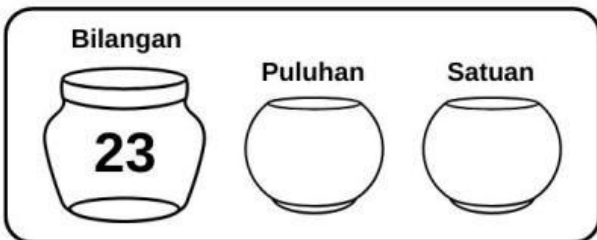


Nama:

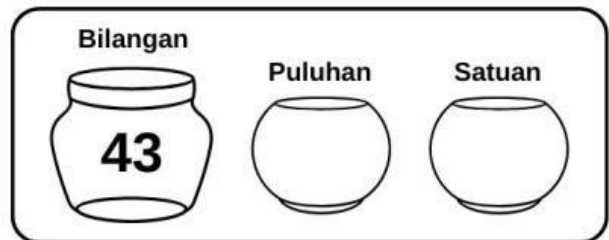
NILAI TEMPAT

Tuliskan nilai tempat di bawah ini dengan benar!

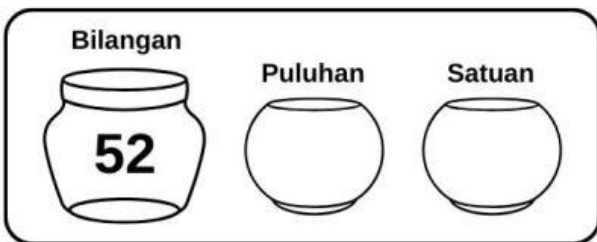
Bilangan Puluhan Satuan



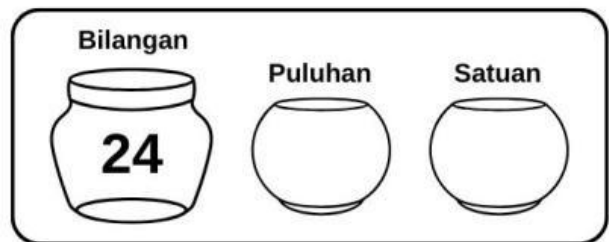
Bilangan Puluhan Satuan



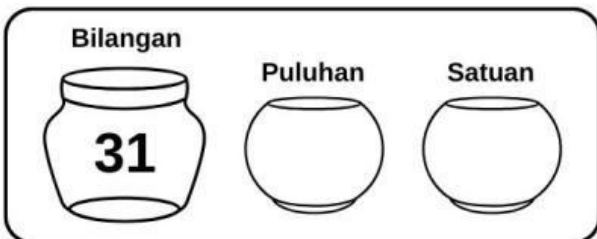
Bilangan Puluhan Satuan



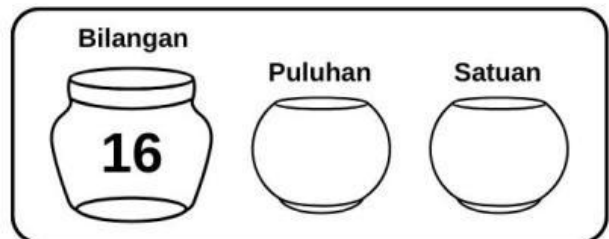
Bilangan Puluhan Satuan



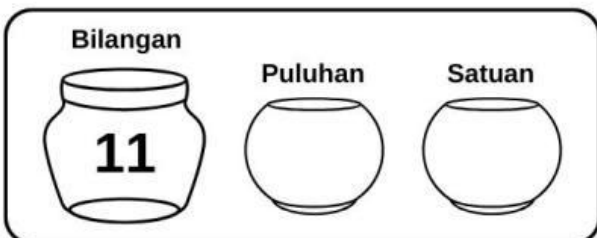
Bilangan Puluhan Satuan



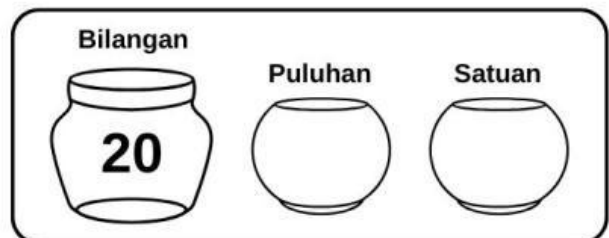
Bilangan Puluhan Satuan



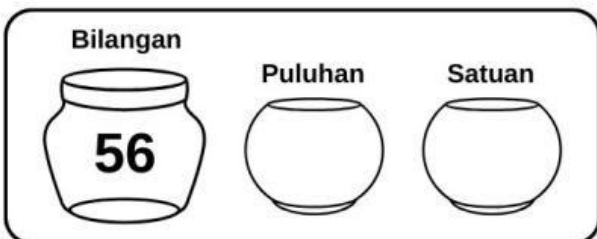
Bilangan Puluhan Satuan



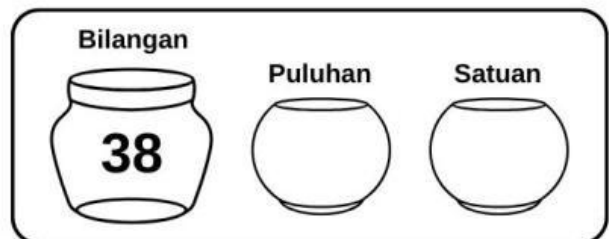
Bilangan Puluhan Satuan



Bilangan Puluhan Satuan



Bilangan Puluhan Satuan



MENENTUKAN NILAI TEMPAT

Tuliskanlah angka-angka di bawah ini sesuai dengan nilai tempatnya.

● $12 = \dots\dots$ Puluhan + $\dots\dots$ Satuan

● $23 = \dots\dots$ Puluhan + $\dots\dots$ Satuan

● $74 = \dots\dots$ Puluhan + $\dots\dots$ Satuan

● $41 = \dots\dots$ Puluhan + $\dots\dots$ Satuan

● $65 = \dots\dots$ Puluhan + $\dots\dots$ Satuan

● $87 = \dots\dots$ Puluhan + $\dots\dots$ Satuan

● $54 = \dots\dots$ Puluhan + $\dots\dots$ Satuan

● $20 = \dots\dots$ Puluhan + $\dots\dots$ Satuan