

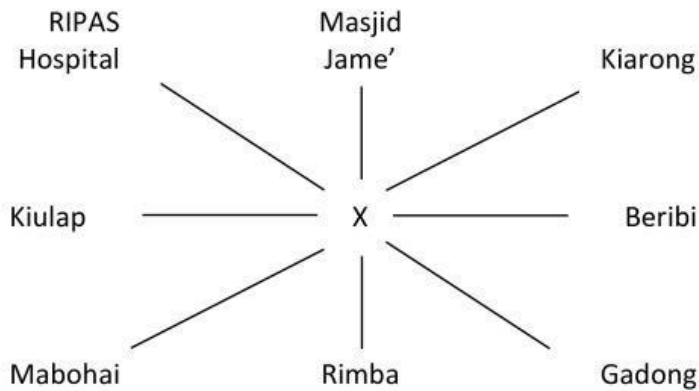
## Test 2C

## PSR Filling the Gaps - Paper 2

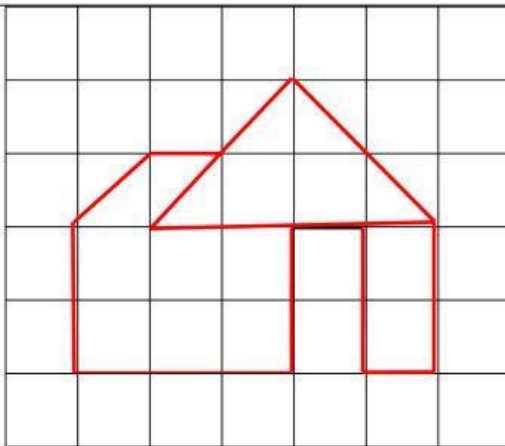
### Comprehension

1. A tray of 10 eggs costs \$2.20. What is the cost of 4 eggs?

2. Farid is standing at a point marked 'X' in the figure below. He is facing Masjid Jame'. Which place is South-West to where he is facing?

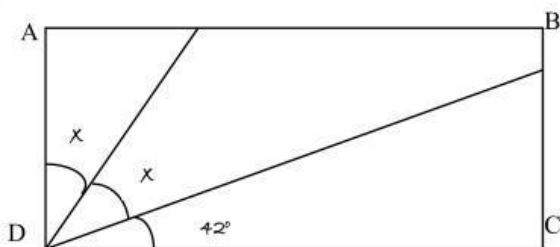


- 3.



If one small square represents 1 cm square, what is the area of the shape?

- 4.



What is the value of  $x$ ?