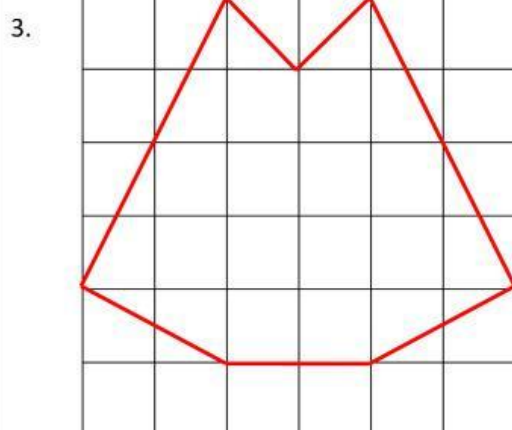


Comprehension

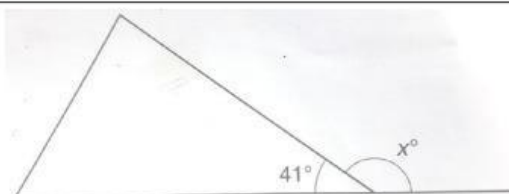
1. Liza jogged a distance of 1Km 530 m. She had to jog another 3 Km 700 m to reach her house. How far did she jog altogether?

2. Study the diagrams below carefully. What is the location of Muara town from the airport?

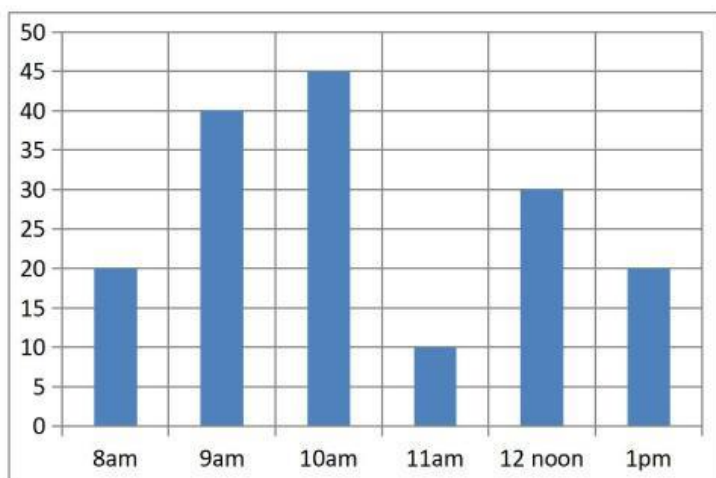


If one small square represents 1 cm square, what is the area of the shape?

4. Find the value of  $x$ :



5. The graph shows the number of people at the canteen at different times of the day. What is the total number of people at the canteen at 10 am and 12 noon?



Total (A)