


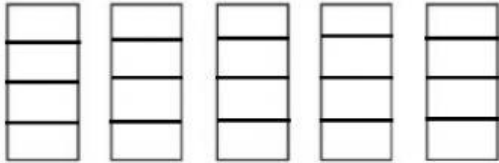
Equal Shares

1. 6 friends share 3 sandwiches equally. Write how much 1 friend will receive below.



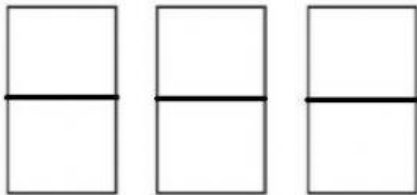
3 sixths of a sandwich OR $\frac{3}{6}$

2. 4 teammates share 5 granola bars equally.
Write how much 1 teammate will receive below.



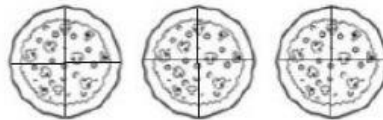
_____ fifth

3. Two friends share 3 fruit bars equally.
How much does each friend get?



3 _____

4. Four brothers share 3 pizzas equally.
How much of a pizza does each brother get?



4 _____