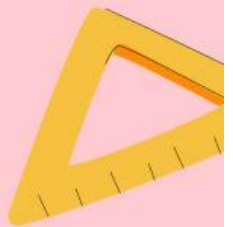


TAHUN PELAJARAN 2024/2025

# LKPD

Lembar Kerja Peserta Didik

Penjumlahan sampai dengan 10



Nama : Nor Syifa

NIM : 2410125120019

Kelas : 1B

# Penjumlahan sampai dengan 10

A. Cerita Penjumlahan


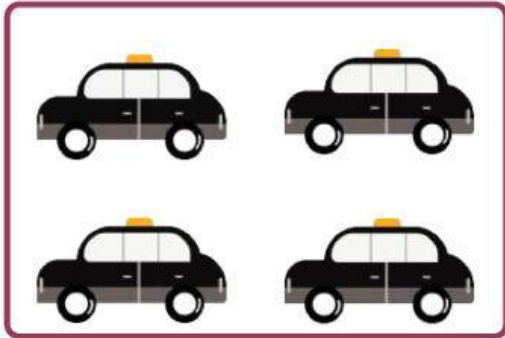
B. Berbagai Cara Melakukan Penjumlahan

C. Soal Cerita Penjumlahan



# PENJUMLAHAN

1. Lengkapilah setiap kalimat dengan bilangan yang benar



1 Ada \_\_\_\_\_ mobil berwarna hitam.  
2 Ada \_\_\_\_\_ mobil berwarna merah.  
3 Semuanya ada \_\_\_\_\_ mobil.  
4



2. ISILAH TITIK-TITIK BERIKUT.

5 6





7 Semuanya ada  Kelereng  
8 9

### 3. Tulis Operasi Penjumlahannya



$$\square + \square = 7$$



$$\square + \square = 8$$



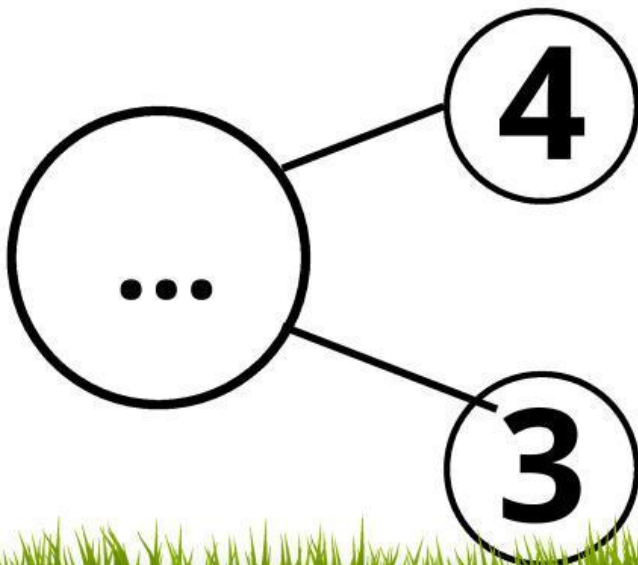
Nama:

Kelas:

# Ayo Berlatih

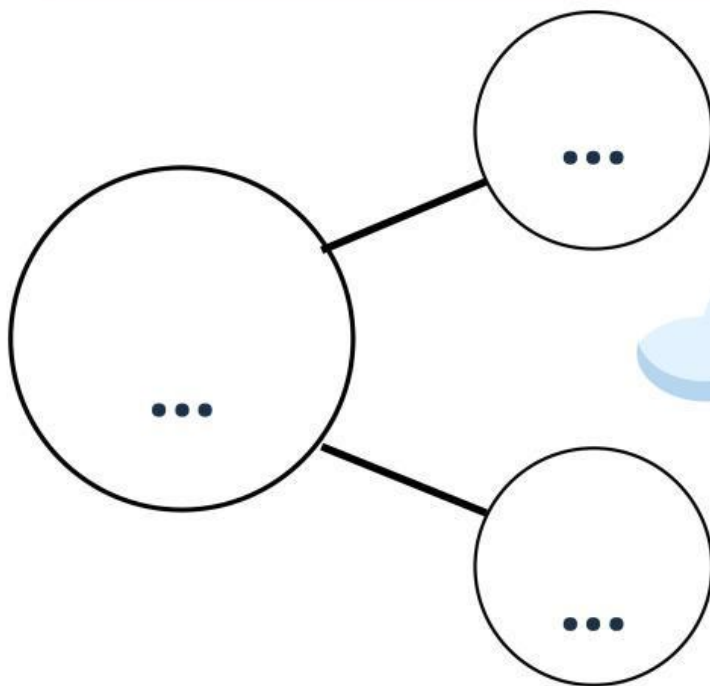

1. Isilah titik-titik berikut.

---



$$4 + 3 = \dots$$

2. Isilah titik-titik berikut.



Berapa jumlah semua pita?

$$5 + 3 = \dots$$

Jumlah semua pita adalah ...

Nama : .....

Kelas : .....

Hitunglah operasi penjumlahan berikut.

|   |   |   |   |   |   |   |   |   |    |
|---|---|---|---|---|---|---|---|---|----|
| 1 | 2 | 3 | 4 | 5 | 6 | 7 | 8 | 9 | 10 |
|---|---|---|---|---|---|---|---|---|----|

$$2 + 3 = 5$$

$$7 + 2 = 9$$

$$5 + 5 = 10$$

|   |   |   |   |   |   |   |   |   |    |
|---|---|---|---|---|---|---|---|---|----|
| 1 | 2 | 3 | 4 | 5 | 6 | 7 | 8 | 9 | 10 |
|---|---|---|---|---|---|---|---|---|----|

$$1 + 3 = \dots$$

$$1 + 1 = \dots$$

$$2 + 2 = \dots$$

$$2 + 4 = \dots$$

$$4 + 1 = \dots$$

$$9 + 1 = \dots$$

$$6 + 2 = \dots$$

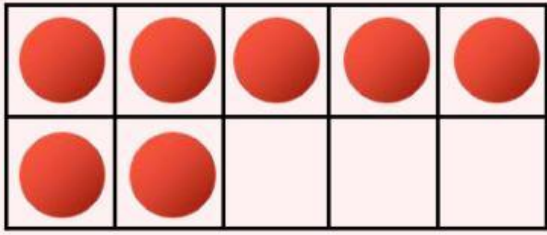
$$6 + 1 = \dots$$

$$8 + 1 = \dots$$

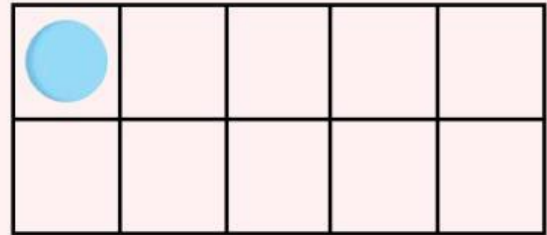
$$5 + 1 = \dots$$



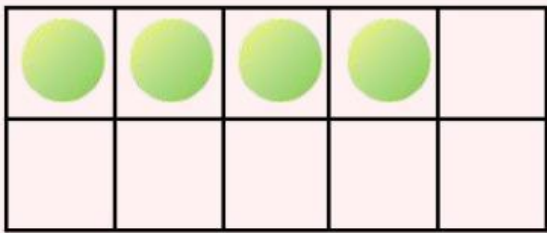
# Penjumlahan yang hasilnya 10



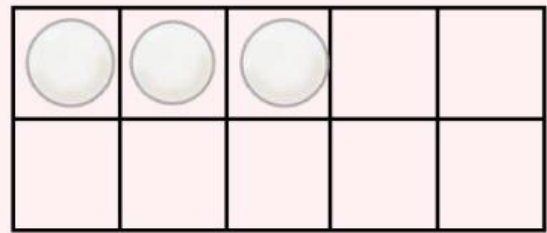
$$7 + \dots = 10$$



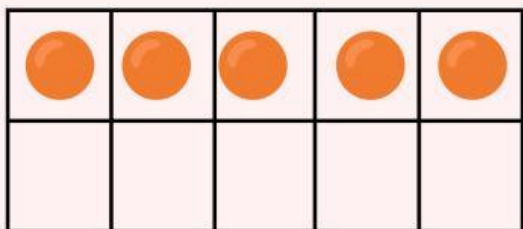
$$\dots + \dots = 10$$




$$\dots + \dots = 10$$



$$\dots + \dots = 10$$



$$5 + \dots = 10$$



$$\dots + \dots = 10$$