

Lembar Kerja Peserta Didik

LKPD

MATEMATIKA

Operasi Penjumlahan Bilangan Cacah Sampai
1.000



Kelompok : _____

Anggota Kelompok :



Penjumlahan Bersusun Panjang

$$\begin{array}{r} 1. \quad 123 = \dots + \dots + \dots \\ \quad 216 = \dots + \dots + \dots + \\ \quad = \dots + \dots + \dots \\ \quad = \dots \end{array}$$

$$\begin{array}{r} 2. \quad 182 = \dots + \dots + \dots \\ \quad 307 = \dots + \dots + \dots + \\ \quad = \dots + \dots + \dots \\ \quad = \dots \end{array}$$

$$\begin{array}{r} 3. \quad 323 = \dots + \dots + \dots \\ \quad 266 = \dots + \dots + \dots + \\ \quad = \dots + \dots + \dots \\ \quad = \dots \end{array}$$

$$\begin{array}{r} 4. \quad 181 = \dots + \dots + \dots \\ \quad 308 = \dots + \dots + \dots + \\ \quad = \dots + \dots + \dots \\ \quad = \dots \end{array}$$

$$\begin{array}{r} 5. \quad 234 = \dots + \dots + \dots \\ \quad 253 = \dots + \dots + \dots + \\ \quad = \dots + \dots + \dots \\ \quad = \dots \end{array}$$

$$\begin{array}{r} 6. \quad 193 = \dots + \dots + \dots \\ \quad 306 = \dots + \dots + \dots + \\ \quad = \dots + \dots + \dots \\ \quad = \dots \end{array}$$

$$\begin{array}{r} 7. \quad 327 = \dots + \dots + \dots \\ \quad 171 = \dots + \dots + \dots + \\ \quad = \dots + \dots + \dots \\ \quad = \dots \end{array}$$

$$\begin{array}{r} 8. \quad 314 = \dots + \dots + \dots \\ \quad 161 = \dots + \dots + \dots + \\ \quad = \dots + \dots + \dots \\ \quad = \dots \end{array}$$

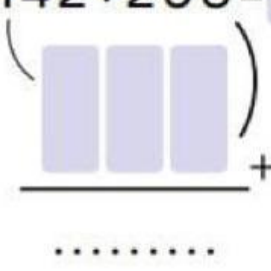
$$\begin{array}{r} 9. \quad 325 = \dots + \dots + \dots \\ \quad 172 = \dots + \dots + \dots + \\ \quad = \dots + \dots + \dots \\ \quad = \dots \end{array}$$

$$\begin{array}{r} 10. \quad 231 = \dots + \dots + \dots \\ \quad 208 = \dots + \dots + \dots + \\ \quad = \dots + \dots + \dots \\ \quad = \dots \end{array}$$

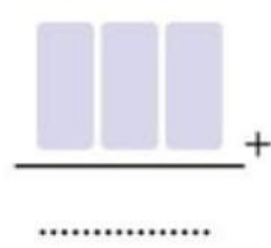
BELAJAR PENJUMLAHAN BERSUSUN

Hitunglah penjumlahan di bawah ini sesuai dengan contoh yang diberikan, kerjakan dengan teliti.

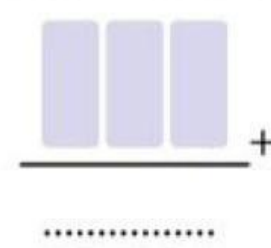
* $142 + 293 =$



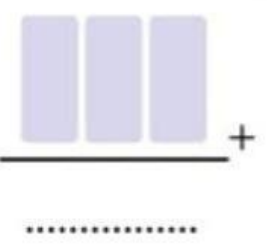
* $658 + 132 = \dots\dots\dots$



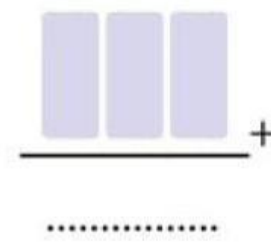
* $445 + 176 = \dots\dots\dots$



* $273 + 665 = \dots\dots\dots$



* $364 + 571 = \dots\dots\dots$



* $542 + 749 = \dots\dots\dots$

