










Count the objects in each set. Compare using $>$, $<$, or $=$ as appropriate.







		
		

Write the numbers in order from the smallest on the left to the largest.

519	767	269	832	298	220	34
-----	-----	-----	-----	-----	-----	----



What comes before, after and between.

BEFORE	BETWEEN	AFTER
		
		

Determine the place value of the underlined digit.

Write the correct number using the given tens and ones.

_____ = 2 tens and 4 ones	_____ = 3 tens and 7 ones
_____ = 1 ten and 2 ones	_____ = 4 tens and 4 ones