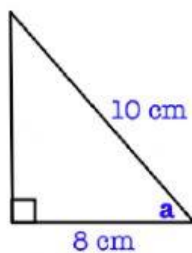


Name: _____ Date: _____

Answer the following questions giving your answers to the nearest **whole number**.

Calculate the size of the missing angles.

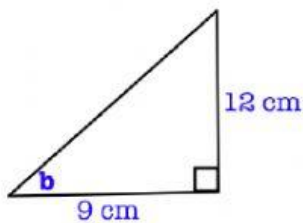
1.



Trig Ratio

Angle size

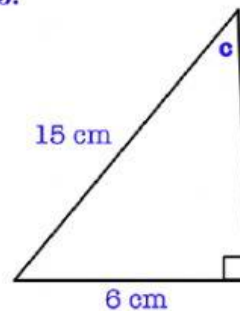
2.



Trig Ratio

Angle size

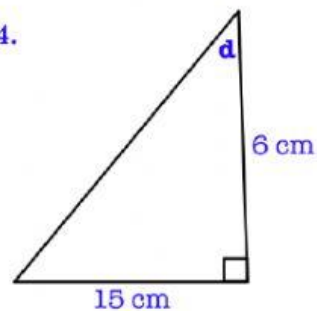
3.



Trig Ratio

Angle size

4.



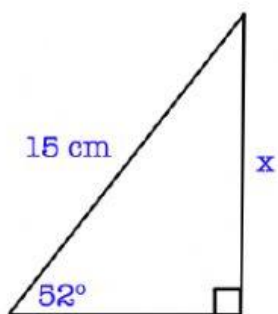
Trig Ratio

Angle size

Answer the following questions giving your answers to **1 decimal place**.

Calculate the length of the side marked **x**, giving your answers correct to 1 decimal place.

1.

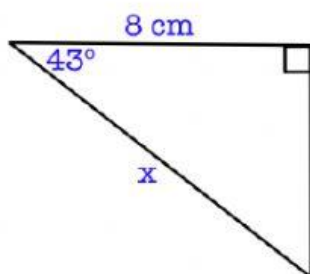


Trig Ratio

Length of side

cm

2.

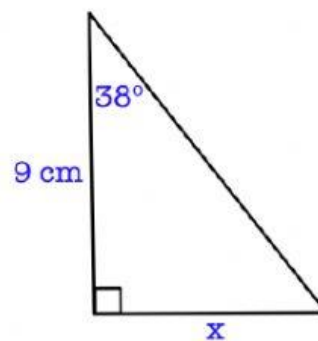


Trig Ratio

Length of side

cm

3.

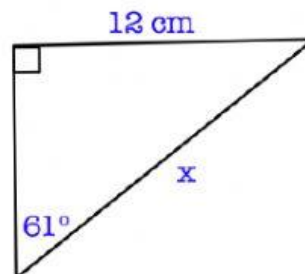


Trig Ratio

Length of side

cm

4.



Trig Ratio

Length of side

cm