

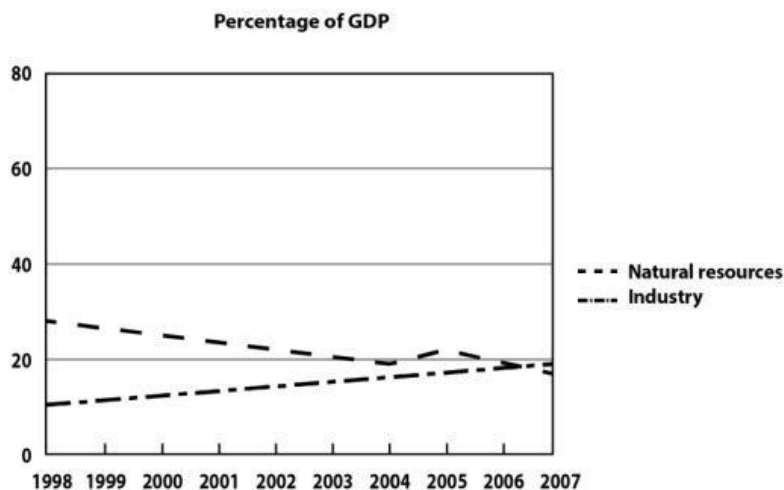
Exercise 6. Điền số liệu và mô tả phù hợp vào chỗ trống

rose

declined

25%

10%



The graph shows that services as a percentage of GDP fell steadily. In 1998, natural resources provided more than (1) _____ of GDP, but this (2) _____ to less than 20% in 2007. Industry earned only about (3) _____ of GDP in 1998, but (4) _____ almost to 20% in 2007.

IV. BÀI TẬP VỀ NHÀ**Exercise 1. Viết lại các câu sau theo cấu trúc**

1. During the 1980s and 1990s, there was a rapid increase to 10,000 in the number of visitors to the castle.

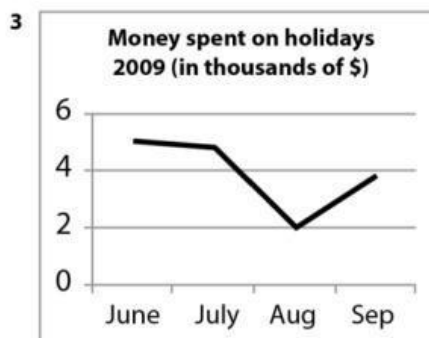
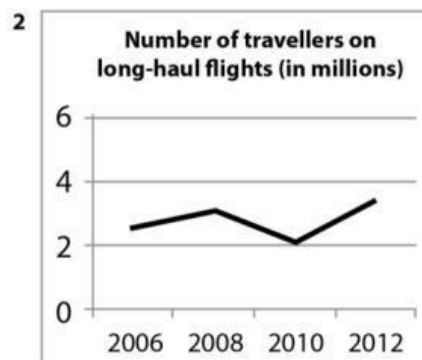
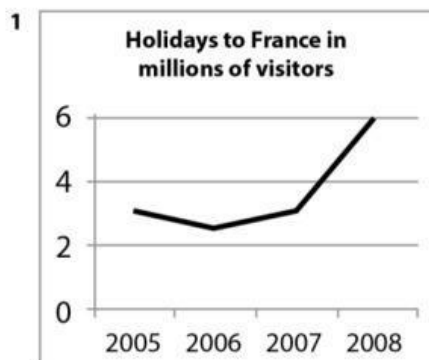
2. In 2010, the percentage of people visiting the castle gradually went down to 30%.

3. The proportion of tourists who visited the festival fluctuated slightly in 1985.

4. The percentage of visitors to the zoo grew sharply by 20% in 2010.

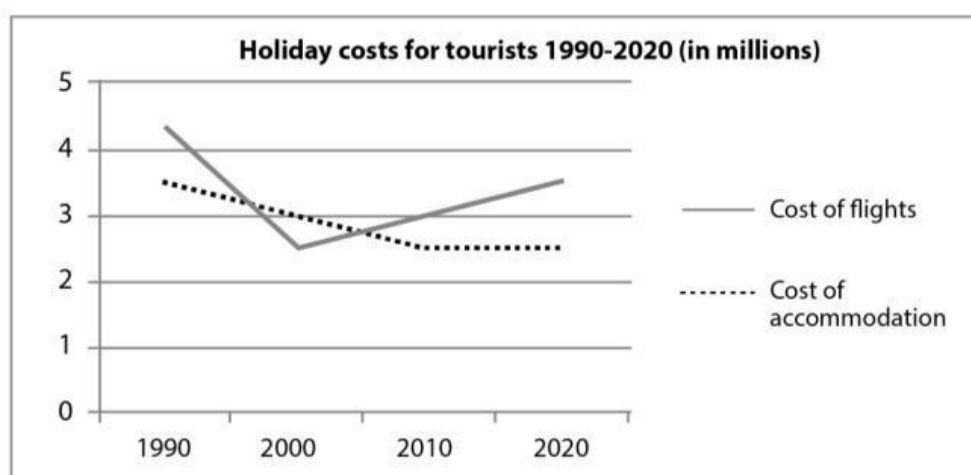
5. The percentage of Americans who followed vegetarian diet fell steadily in 1999.
-
6. There was a significant growth in the amount of Government investment in Health Care system in 2000.
-
7. The population growth rate witnessed a slow rise of 2.5% in 1950.
-
8. The year 1990 saw a quick drop in the unemployment rate.
-
9. The number of buses went up moderately by 20% in 2006.
-
10. There was an upward trend in the number of visitors to the website over the period.
-

Exercise 2. Điền mô tả phù hợp tương ứng với biểu đồ



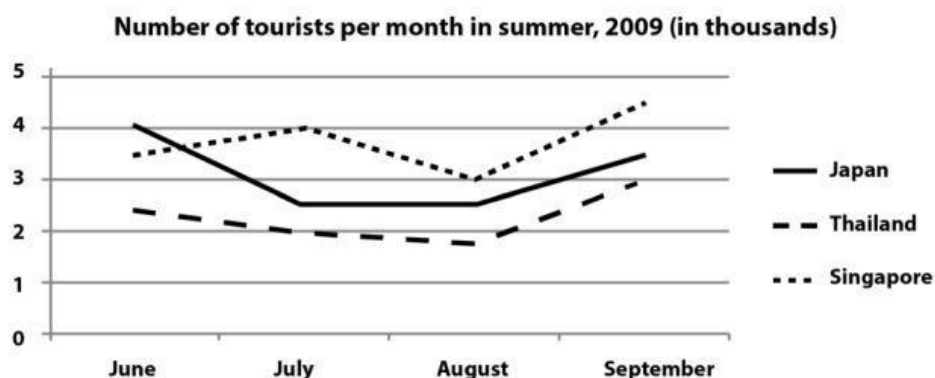
1. There was a _____ in the number of holidays to France in 2008.
2. The number of travellers on long-haul flights _____ between 2006 and 2012.
3. There was a _____ in the amount of money spent on holidays in August 2009.
4. The price of skiing holidays _____ in 2008.

Exercise 3. Điền động từ mô tả thích hợp với xu hướng



1. Between 1990 and 2000 the cost of flights _____ rapidly.
2. The cost of accommodation _____ gradually for thirty years after 1990.
3. It is predicted that the cost of accommodation _____ from 2010 to 2020.

Exercise 4. Điền động từ/ tính từ/ trạng từ mô tả thích hợp với xu hướng



The graph shows how many tourists visited three countries in the summer of 2009. Most tourists went to Singapore in June and September. The number (1) _____ between 3.5 and 4.5 thousand. Fewer tourists traveled to Japan and Thailand. The number of people who visited Thailand (2) _____ from 2.5 thousand to about 1.8 from June to August then (3) _____ to 3 thousand in September. We can see that the trend for Japan was similar. There was a (4) _____ in tourists from June to July. The number (5) _____ in August and then (6) _____ steadily in September.