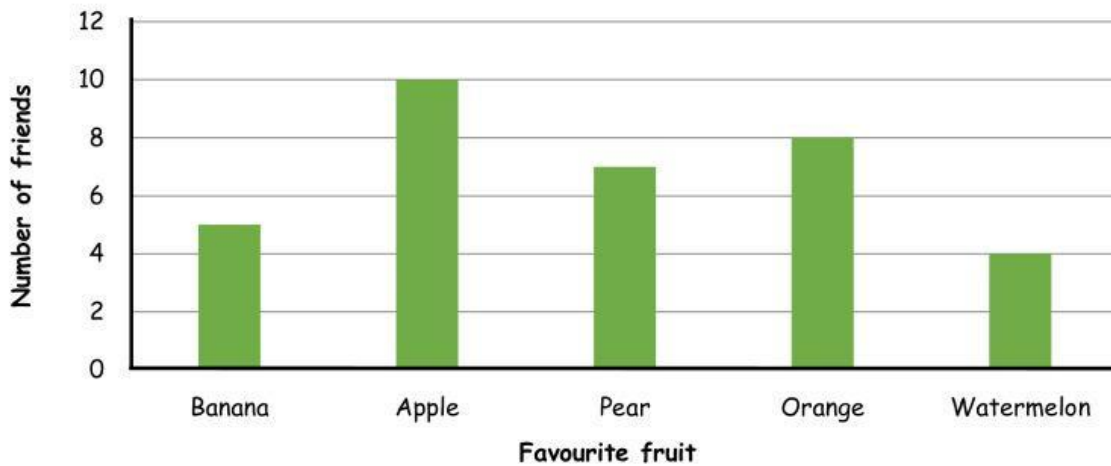


## REVISION OF UNITS 3 & 4

1. Look and write "*Commutative property*" or "*Associative property*".

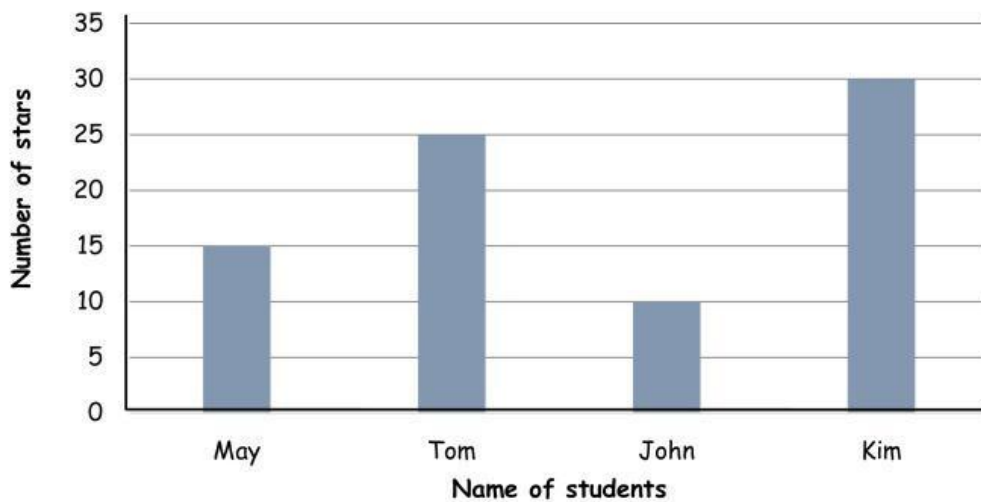
a) $14 + 48 + 86 = (14 + 86) + 48$	<i>Associative property</i>
b) $a + b = b + a$	
c) $a + b + c = (a + b) + c$	
d) $53 + 59 + 41 = 53 + (59 + 41)$	
e) $22 + 78 = 78 + 22$	
f) $131 + 125 + 75 = 131 + (125 + 75)$	

2. Look at the bar chart and fill in the data table.



Favorite fruit	Banana	Apple	Pear	Orange	Watermelon
Number of friends					

3. The chart below shows the number of stars these students got last week. Look and answer the questions below.



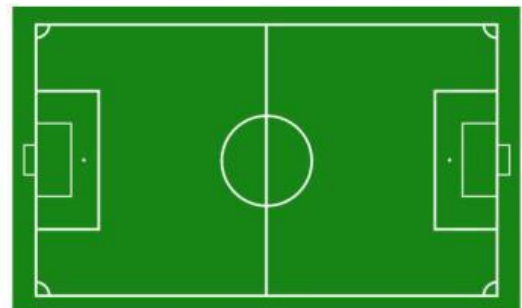
What is the average number of stars they got?

---

4. Find the perimeter of the football field when the length is 12m and the width is 8m.

The perimeter of the football field is:

---



Answer: \_\_\_\_\_.