


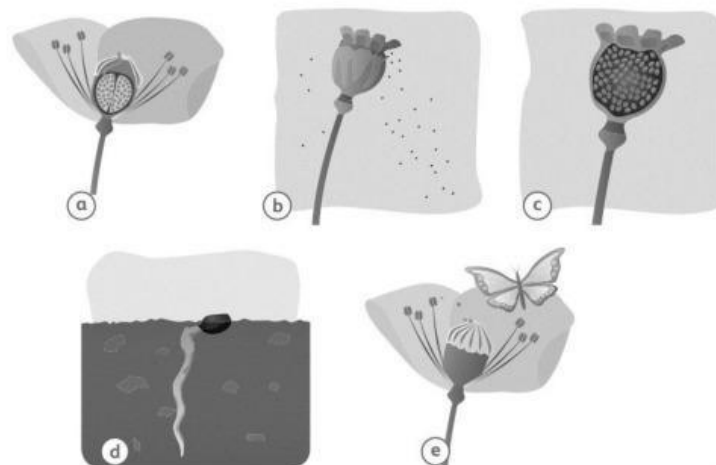
MOCK TEST - SCIENCE MIDTERM 1 - INTERNATIONAL GRADE 4

1 Draw a line to match the name of the parts of the flower to the picture.



[Total Points: 5]

2 Identify the stages of the Life Cycle of a Plant. Write the names for each stage.



C Seed Production
A

D
E

[Total Points: 5]

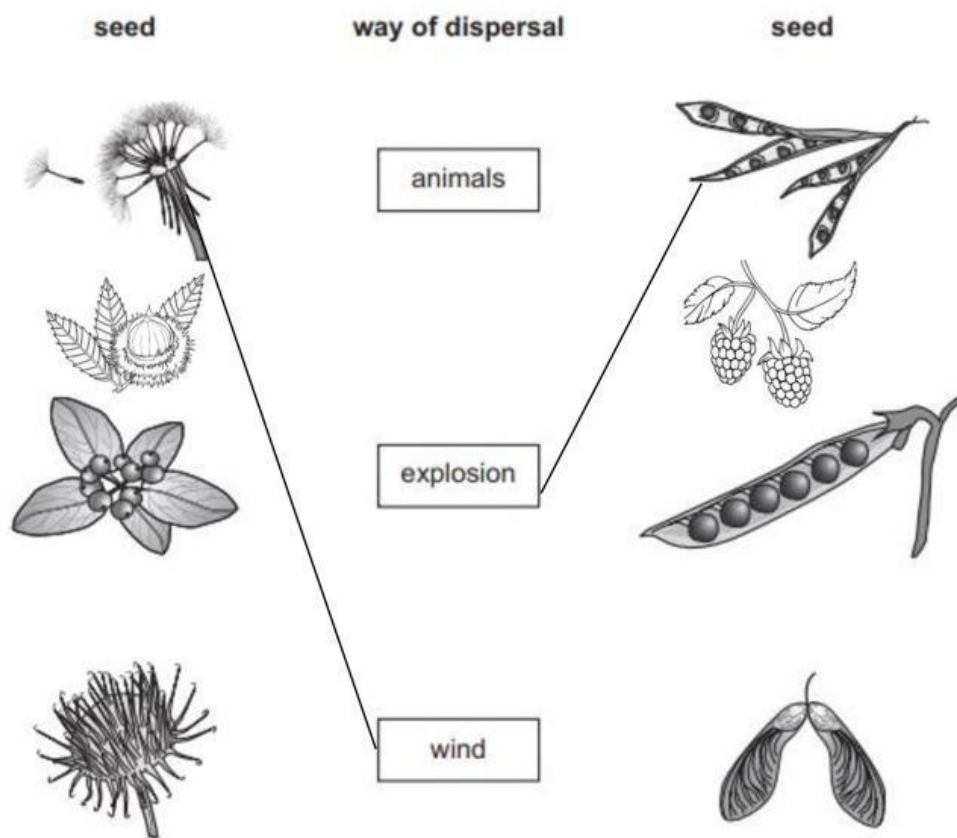
- 3 Seeds need things to germinate. After germination, it needs to make its own food. Fill in the blanks the needs of seeds and plants.

The plants need soil, wind, w....., l....., a..... and w..... to grow up.

The seeds are different. Seeds don't need l..... and s..... . They need water, w..... and a..... .

[Total Points: 2]

- 4 The pictures show different seeds.
Draw a line from each seed to the way it is dispersed.



[Total Points: 4]

- 5 Read each statement below. Draw a tick (✓) if it is True and a cross (✗) if it is False.

0. Vibrations make sounds.

T

1. Pitch is how loud or soft sounds are

.....

2. Sounds travel faster in solids.
3. Low- pitched sounds are made by slow vibrations.
4. A scream is a soft and high-pitched sound.

[Total Points: 4]

- 6 **Class 4i used a rating system of ticks to record the volume of sounds they heard during their lunch break. These are the results.**

Sound	Loudness
Talking	✓✓
Laughing	✓✓✓
Shouting	✓✓✓✓
Music playing	✓✓✓
School bell ringing	✓✓✓✓✓

1. Which sound was the loudest?
2. Which sound was the quietest?

[Total Points: 2]

- **END** -