

**WEEK 6 (QUARTER 3)
 S.Y. 2023-2024**

ISKOR:

PANGALAN: _____

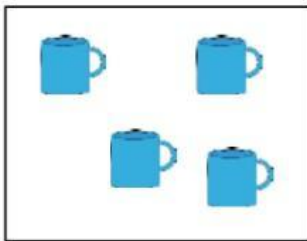
COMPETENCY: a. Rote count up to 20
 b. Naisulat ang pagdagdag at pagbawas ng bilang gamit ang mga konkretong bagay (MKSC 00-12)
REFERENCE: Kindergarten Module 6 Quarter 3 Week 1(SLM)




PAUNLARIN
Gawain 1

A. Panuto: Bilangin ang mga bagay na nasa loob ng kahon. Isulat ang tamang bilang nito sa patlang.

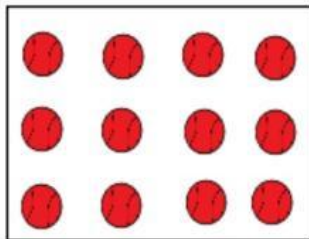
1.



2.



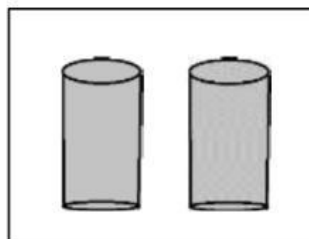
3.



4.



5.



Gawain 2


Pagtapatin Natin!

B. Panuto: Bilangin at pagtambalin ang mga bagay sa hanay A at tamang sagot na nasa hanay B.


Hanay A

Hanay B

1.



+



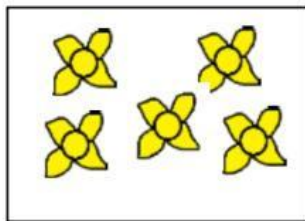
•

•

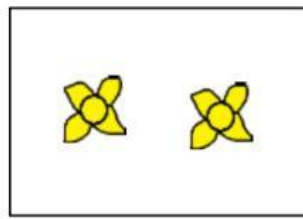
5

+

2.



+



•

•

7

+

3.



+



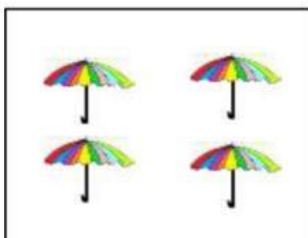
•

•

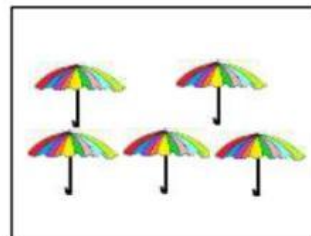
9

+

4.



+



•

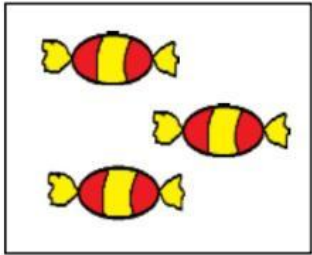
•

3

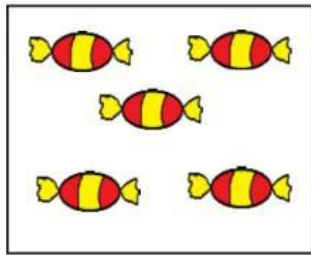
+

Gawain 3

C.Panuto: Bilangin at isulat ang katumbas na numero sa bawat kahon. Gamit ang pandagdag isulat ang sagot sa bawat kahon.

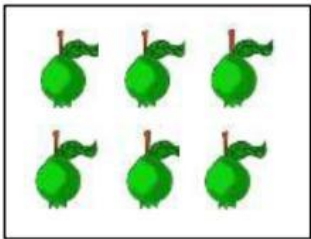


+

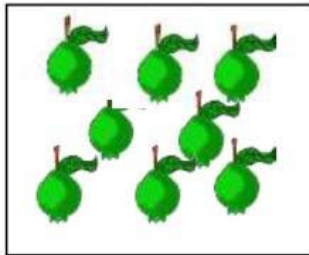


+

=

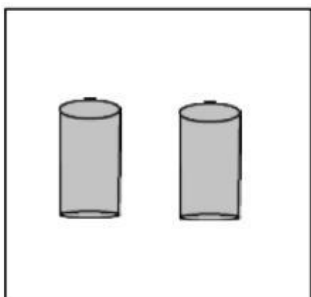


+

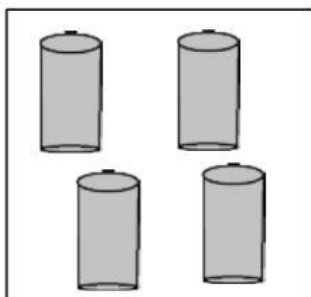


+

=



+



+

=



Gawin

Bawasan Natin!

Panuto: Sagutan ang mga sumusunod sa pamamagitan ng pagbawas. Isulat ang tamang sagot sa loob ng kahon.

1. $7 - 2 =$

2. $9 - 4 =$

3. $5 - 3 =$

SWAK Development Team

Writers: **Annie Rose U. Jamio, Sheila Marie F. Duran, Rowena B. Lucero, Arlyn C. Nepomuceno, Catherine Mae B. Celiz, Yeedah D. Botona**
Content Editors: **Angela Divina S. Respecia, Harlequeen D. Dante, Katherine Florence S. Manubag, Lucy C. Cabacongan, Mary Rose S. Tablo**
LR Evaluator: **Jesse Christine L. Campos, Marilou M. Bueno**
Illustrator: **Yeedah D. Botona**
Creative Arts Designer: **Nica Marie L. Pama**
Division Kindergarten Coordinator: **Ma. Angelica E. Figueroa**
Education Program Supervisor – Learning Resources: **Sally A. Palomo**
Curriculum Implementation Division Chief: **Juliet F. Lastimoso**
Asst. Schools Division Superintendent: **Dr. Carlos G. Susarno, CESE**
Schools Division Superintendent: **Romelito G. Flores, CESO V**