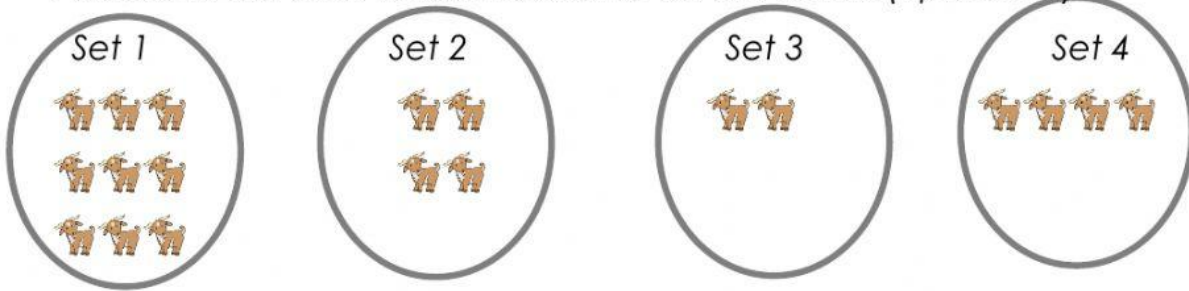


Name: \_\_\_\_\_

## Comparing Numbers


A. Look at the sets. Write the answer on the blank. (1pt. each)



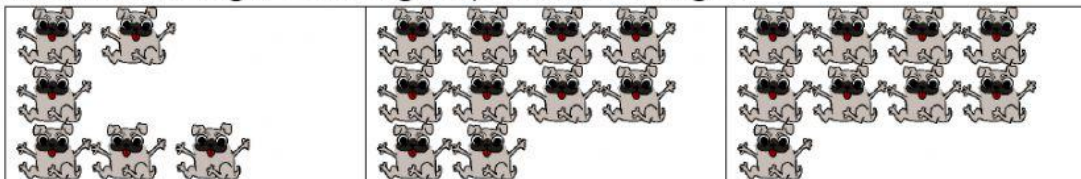
1. Which set has the least amount? \_\_\_\_\_
2. Which set has the most? \_\_\_\_\_
3. Which sets have the same amount? \_\_\_\_\_

A. Click the correct answer.

4. Pam needs 13 lemons to make lemonade. Which group has the amount of lemons Pam needs?



5. Max has 8 dogs. Which group has **less** dogs?



6 I have 4 balls. Which group has **more** balls?

