








Count and write the numbers



Complete each sentence with the correct ordinal number word from the box below.

Mrs. McDonnelly's class lined up to have their class picture taken. They lined up in the following order:

Aiden, Jimmy, Sam, Kayla, Gabriel

1. Jimmy is the _____ student in line.
2. Kayla is the _____ student in line.
3. Aiden is the _____ student in line.
4. Gabriel is the _____ student in line.
5. Sam is the _____ student in line.

Write the number names in the given boxes

15 _____

26 _____

79 _____

56 _____

25 _____

47 _____

Write the place values for the following given numbers

890

| | | |
|---|---|---|
| | | |
| H | T | O |

56

| | | |
|---|---|---|
| | | |
| H | T | O |

100

| | | |
|---|---|---|
| | | |
| H | T | O |

567

| | | |
|---|---|---|
| | | |
| H | T | O |

Write a 3-Digit Number in Expanded Form

456 _____

645 _____

190 _____

740 _____

58 _____

369 _____