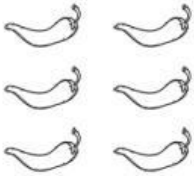


Name: \_\_\_\_\_

Date: \_\_\_\_\_

Write **two** equations to match each array. Add the **rows** ⇨. Then, add the **columns** ⇩.

1.



⇨  $\underline{\quad} + \underline{\quad} + \underline{\quad} = \underline{\quad}$

⇩  $\underline{\quad} + \underline{\quad} = \underline{\quad}$


2.



⇨  $\underline{\quad} + \underline{\quad} = \underline{\quad}$

⇩  $\underline{\quad} + \underline{\quad} + \underline{\quad} + \underline{\quad} = \underline{\quad}$

3.



⇨  $\underline{\quad} + \underline{\quad} + \underline{\quad} = \underline{\quad}$

⇩  $\underline{\quad} + \underline{\quad} + \underline{\quad} + \underline{\quad} = \underline{\quad}$


Use the arrays to find the missing numbers.

4.



⇩  $\underline{2} + \underline{\quad} + \underline{2} + \underline{2} + \underline{\quad} = \underline{10}$

5.



⇨  $\underline{3} + \underline{\quad} = \underline{6}$