




Skill Division

Instructions: Complete the picture to find the result (quotient)

$$18 \div 6 =$$



Instruction: Make equal groups to find the result
(quotient)

$$20 \div 5 =$$

--	--	--	--

