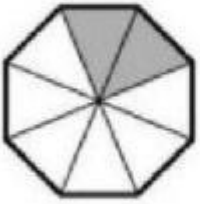
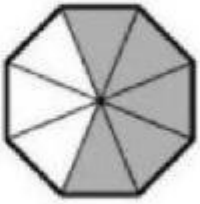
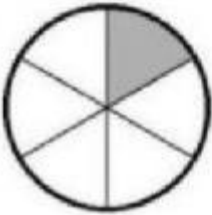








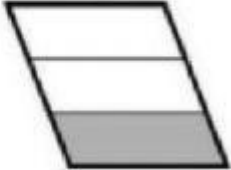


## مقارنة الكسور العادية للصف الخامس

(1) اكتب > ، < أو = :-

 $\frac{2}{8}$	<input type="checkbox"/>	 $\frac{5}{8}$
 $\frac{1}{6}$	<input type="checkbox"/>	 $\frac{4}{6}$
 $\frac{2}{5}$	<input type="checkbox"/>	 $\frac{4}{5}$

 $\frac{2}{5}$	<input type="checkbox"/>	 $\frac{4}{5}$
 $\frac{1}{7}$	<input type="checkbox"/>	 $\frac{5}{7}$
 $\frac{2}{3}$	<input type="checkbox"/>	 $\frac{1}{3}$

2) اكتب < ، > أو = :-

