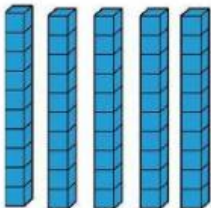





Name: _____

- Write the number that is represented with the blocks. Then choose the correct value for each one. 1%

1.   ones tens

2.   hundred ones

3.   hundred tens

4.   ones tens

- Drag the correct number in words. 1%

1. **300**

2. **500**

3. **700**

Three hundred	Nine hundred
Five hundred	Seven hundred

- Draw a line to the matching shape. 0.5%

