

40 How Many ?

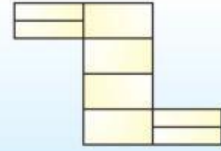
1. How many rectangles does the figure have ?

(a) 9

(b) 10

(c) 15

(d) 18



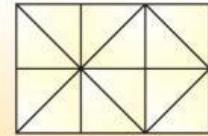
2. How many squares does the figure have ?

(a) 6

(b) 9

(c) 7

(d) 10




3. How many triangles are there in the given figure ?

(a) 10

(b) 9

(c) 8

(d) 4



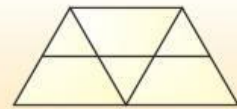
4. How many triangles are there in the given figure ?

(a) 3

(b) 5

(c) 6

(d) 9



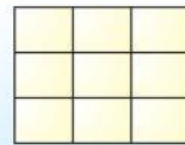
5. How many squares are there in the given figure ?

(a) 14

(b) 12

(c) 13

(d) 15



6. How many triangles are there in the given figure ?

(a) 4

(b) 6

(c) 5

(d) 7



7. How many triangles are there in the given figure ?

(a) 20

(b) 21

(c) 22

(d) 23



8. How many triangles are there in the given figure :

(a) 5

(b) 6

(c) 8

(d) 10

